



Represent Data

Math

Name _____ Class _____ Date _____

Create column graphs to show how many cakes were ordered from Bill's Bakery and Bob's Bakery this week.

Bill's Bakery	
Monday	5
Tuesday	8
Wednesday	10
Thursday	6
Friday	11
Saturday	12
Sunday	0

M	T	W	T	F	S	S	

Bob's Bakery	
Monday	4
Tuesday	7
Wednesday	9
Thursday	10
Friday	12
Saturday	12
Sunday	8

M	T	W	T	F	S	S	

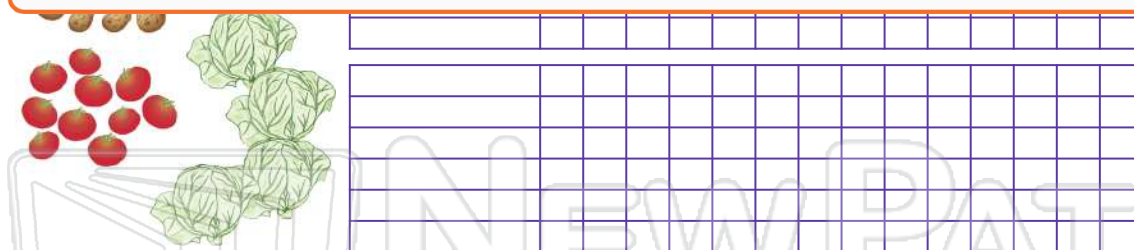
Bill's Bakery: ___ cakes were ordered on Monday, double that number were ordered on _____.
 ___ cakes were ordered on Saturday and half as many were ordered on _____. Bill's Bakery is closed
 on _____. ___ cakes were ordered from Monday to Friday. ___ cakes were ordered during that week.

Bob's Bakery: The three busiest days for cake orders are _____ and _____.



PREVIEW

Please [Sign In](#) or [Sign Up](#) to download the printable version of this worksheet



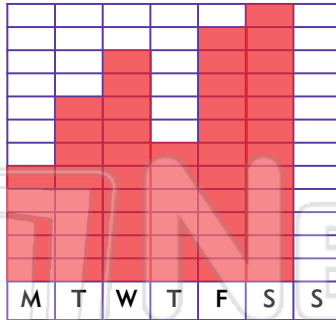
There are more _____ than onions. There are fewer _____ than zucchini. There are ___ zucchini and twice as many _____. There are ___ carrots and half that number of _____. There are ___ more potatoes than tomatoes and ___ more potatoes than zucchini. There are ___ more potatoes than onions and ___ more onions than carrots. There are ___ more onions than tomatoes and ___ more potatoes than carrots. There are ___ vegetables altogether. If Bailey had won two trays, she would have had ___ carrots, ___ zucchini, ___ potatoes, ___ onions, ___ tomatoes and ___ lettuce. Bailey decided to give half of the tray of vegetables to her friend so she was left with ___ carrots, ___ zucchini, ___ potatoes, ___ onions, ___ tomatoes and ___ lettuce.



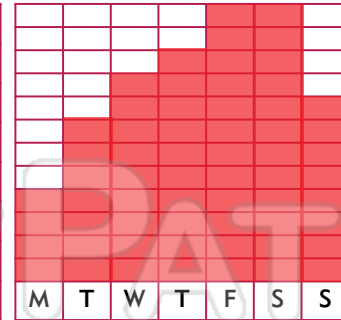
ANSWER KEY

Create column graphs to show how many cakes were ordered from Bill's Bakery and Bob's Bakery this week.

Bill's Bakery	
Monday	5
Tuesday	8
Wednesday	10
Thursday	6
Friday	11
Saturday	12
Sunday	0



Bob's Bakery	
Monday	4
Tuesday	7
Wednesday	9
Thursday	10
Friday	12
Saturday	12
Sunday	8



Bill's Bakery: 5 cakes were ordered on Monday, double that number were ordered on Wed. 12 cakes were ordered on Saturday and half as many were ordered on Thurs. Bill's Bakery is closed on Sun. 40 cakes were ordered from Monday to Friday. 52 cakes were ordered during that week.

Bob's Bakery: The three busiest days for cake orders are Thurs Fri and Sat.



PREVIEW

Please [Sign In](#) or [Sign Up](#) to download the printable version of this worksheet



There are more potatoes than onions. There are fewer lettuce than zucchini. There are 6 zucchini and twice as many onions. There are 8 carrots and half that number of lettuce. There are 4 more potatoes than tomatoes and 8 more potatoes than zucchini. There are 2 more potatoes than onions and 4 more onions than carrots. There are 2 more onions than tomatoes and 6 more potatoes than carrots. There are 54 vegetables altogether. If Bailey had won two trays, she would have had 16 carrots, 12 zucchini, 28 potatoes, 24 onions, 20 tomatoes and 8 lettuce. Bailey decided to give half of the tray of vegetables to her friend so she was left with 4 carrots, 3 zucchini, 7 potatoes, 6 onions, 5 tomatoes and 2 lettuce.