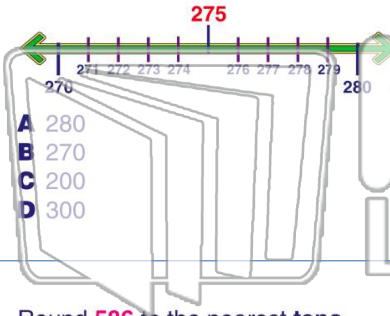





Rounding Numbers

Name _____ Class _____ Date _____

1 Round **275** to the nearest **tens**.



2 Round **462** to the nearest **tens**.



3 Round **586** to the nearest **tens**.

A 580

4 **855** rounded to the nearest **tens** is **860**.

855

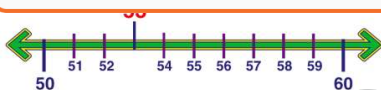
5



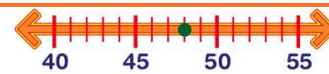
PREVIEW

Please [Sign In](#) or [Sign Up](#) to download the printable version of this worksheet

7



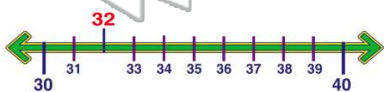
A 55
B 60
C 53
D 50



A 40
B 45
C 50
D 60

9

32 rounded to the nearest **tens** is **40**.

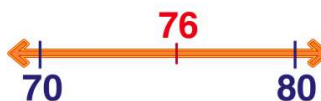


True or false?

A true
B false

10

76 rounded to the nearest **tens** is **80**.



True or false?

A true
B false

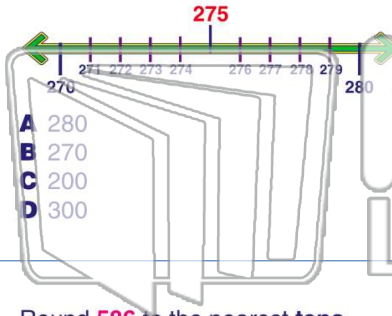


Rounding Numbers


Math
D

Name _____ Class _____ Date _____

1 Round **275** to the nearest **tens**.



2 Round **462** to the nearest **tens**.



3 Round **586** to the nearest **tens**.

A 580

4 **855** rounded to the nearest **tens** is **860**.

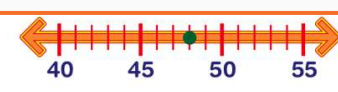
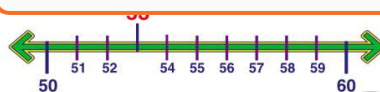
855

PREVIEW

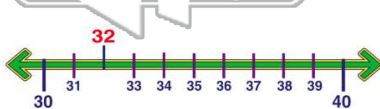
Please [Sign In](#) or [Sign Up](#) to download the printable version of this worksheet

5

7



9 **32** rounded to the nearest **tens** is **40**.



10 **76** rounded to the nearest **tens** is **80**.

