

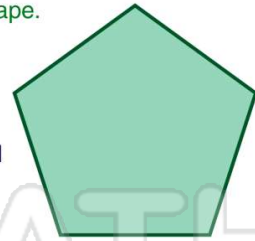


Name _____ Class _____ Date _____

- 1 The following shape is a _____.
- A square
 - B rectangle
 - C trapezoid
 - D parallelogram



- 2 Identify this shape.
- A octagon
 - B pentagon
 - C hexagon
 - D quadrilateral



- 3 A _____ has only **one** pair of parallel sides.



- 4 A _____ has **6** sides.
- A hexagon
 - B pentagon
 - C octagon



PREVIEW

- 7 Please [Sign In](#) or [Sign Up](#) to download the printable version of this worksheet

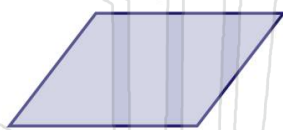
- C exactly the same size
- D different shapes



- C rhombus
- D rectangle



- 9 Name this shape.



- A square
- B rectangle
- C trapezoid
- D parallelogram

- 10 A _____ has 5 sides.

- A triangle
- B octagon
- C hexagon
- D pentagon





Name _____ Class _____ Date _____

1 The following shape is a _____.

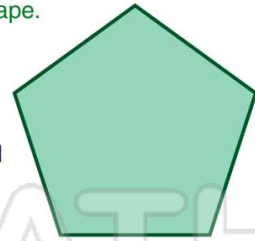
- A square
- B rectangle
- C trapezoid
- D parallelogram



(A)

2 Identify this shape.

- A octagon
- B pentagon
- C hexagon
- D quadrilateral



(B)

3 A _____ has only **one** pair of parallel sides.



(C)

4 A _____ has **6** sides.

- A hexagon
- B pentagon
- C octagon



(A)

5



(B)

PREVIEW

Please [Sign In](#) or [Sign Up](#) to download the printable version of this worksheet

7

- C exactly the same size
- D different shapes

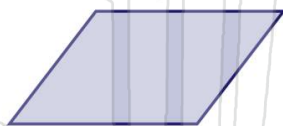


- C rhombus
- D rectangle



(A)

9 Name this shape.



- A square
- B rectangle
- C trapezoid
- D parallelogram

(D)

10 A _____ has 5 sides.

- A triangle
- B octagon
- C hexagon
- D pentagon



(D)