

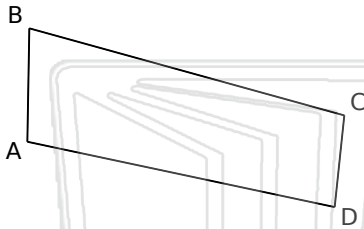


Interior Angles of Quadrilaterals

Math

Name _____ Class _____ Date _____

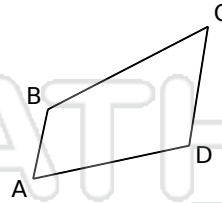
Find the measure of the missing angle



$\angle BAD = \underline{\hspace{1cm}}$ $\angle BCD = 99^\circ$
 $\angle ABC = 76^\circ$ $\angle CDA = 84^\circ$



$\angle BAD = 87^\circ$ $\angle BCD = \underline{\hspace{1cm}}$
 $\angle ABC = 86^\circ$ $\angle CDA = 81^\circ$



$\angle BAD = 66^\circ$ $\angle BCD = \underline{\hspace{1cm}}$
 $\angle ABC = 129^\circ$ $\angle CDA = 111^\circ$

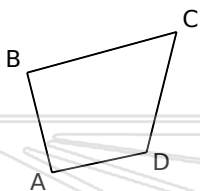


$\angle BAD =$
 $\angle ABC =$

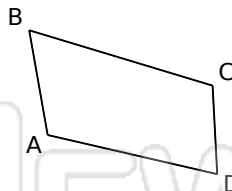
PREVIEW

Please [Sign In](#) or [Sign Up](#) to download the printable version of this worksheet

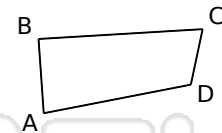
$\angle BAD =$
 $\angle ABC =$



$\angle BAD = 92^\circ$ $\angle BCD = \underline{\hspace{1cm}}$
 $\angle ABC = 91^\circ$ $\angle CDA = 116^\circ$



$\angle BAD = \underline{\hspace{1cm}}$ $\angle BCD = 110^\circ$
 $\angle ABC = 63^\circ$ $\angle CDA = 74^\circ$



$\angle BAD = 83^\circ$ $\angle BCD = 75^\circ$
 $\angle ABC = \underline{\hspace{1cm}}$ $\angle CDA = 113^\circ$

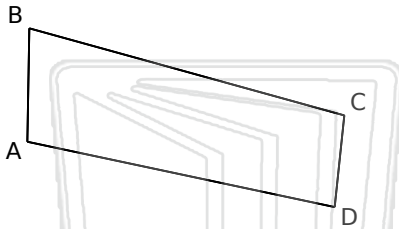


Interior Angles of Quadrilaterals - Answer Key

Math

Name _____ Class _____ Date _____

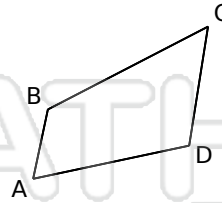
Find the measure of the missing angle



$$\begin{aligned} \angle BAD &= 101^\circ & \angle BCD &= 99^\circ \\ \angle ABC &= 76^\circ & \angle CDA &= 84^\circ \end{aligned}$$



$$\begin{aligned} \angle BAD &= 87^\circ & \angle BCD &= 106^\circ \\ \angle ABC &= 86^\circ & \angle CDA &= 81^\circ \end{aligned}$$



$$\begin{aligned} \angle BAD &= 66^\circ & \angle BCD &= 54^\circ \\ \angle ABC &= 129^\circ & \angle CDA &= 111^\circ \end{aligned}$$

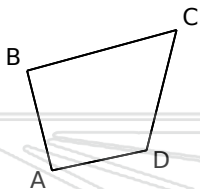


$\angle BAD =$
 $\angle ABC =$

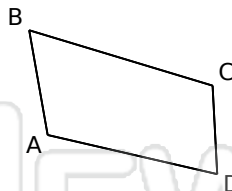
PREVIEW

Please [Sign In](#) or [Sign Up](#) to download the printable version of this worksheet

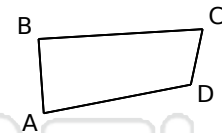
$\angle BAD =$
 $\angle ABC =$



$$\begin{aligned} \angle BAD &= 92^\circ & \angle BCD &= 61^\circ \\ \angle ABC &= 91^\circ & \angle CDA &= 116^\circ \end{aligned}$$



$$\begin{aligned} \angle BAD &= 113^\circ & \angle BCD &= 110^\circ \\ \angle ABC &= 63^\circ & \angle CDA &= 74^\circ \end{aligned}$$



$$\begin{aligned} \angle BAD &= 83^\circ & \angle BCD &= 75^\circ \\ \angle ABC &= 89^\circ & \angle CDA &= 113^\circ \end{aligned}$$