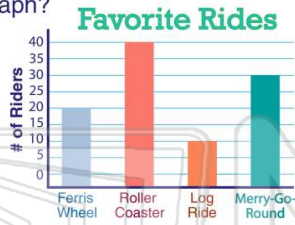




Name _____ Class _____ Date _____

1 How many **rides** are included in this graph?

- A 3
- B 4
- C 5
- D 6



2 How many **people** rode the **Log Ride**?

- A 10
- B 20
- C 30
- D 40



3 Which is the **most popular** ride?

- A Log Ride
- B Merry-Go-Round
- C Roller Coaster



4 How many **more** rode the **Merry-Go-Round** than the **Ferris Wheel**?

- A 15
- B 30



5



PREVIEW

Please [Sign In](#) or [Sign Up](#) to download the printable version of this worksheet

7

- C 80
- D 100



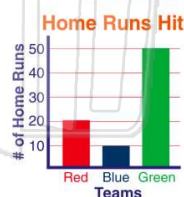
- C Blue
- D Orange



9

How many **more** home runs did the **red team** hit than the **blue team**?

- A 5
- B 15
- C 20
- D 10



10

How many **more** home runs did the **green team** hit than the **red team** and **blue team** combined?

- A 20
- B 10
- C 30
- D 50

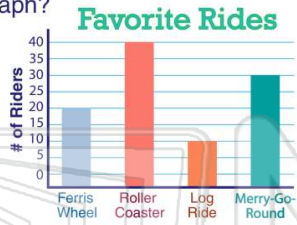




Name _____ Class _____ Date _____

1 How many rides are included in this graph?

- A 3
- B 4
- C 5
- D 6



(B)

2 How many people rode the Log Ride?

- A 10
- B 20
- C 30
- D 40



(A)

3 Which is the most popular ride?

- A Log Ride
- B Merry-Go-Round
- C Roller Coaster



(C)

4 How many more rode the Merry-Go-Round than the Ferris Wheel?

- A 15
- B 30



(D)

5



(A)

PREVIEW

Please [Sign In](#) or [Sign Up](#) to download the printable version of this worksheet

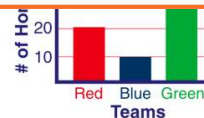
7

- C 80
- D 100



(C)

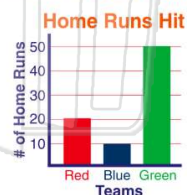
- C Blue
- D Orange



(C)

9 How many more home runs did the red team hit than the blue team?

- A 5
- B 15
- C 20
- D 10



(D)

10 How many more home runs did the green team hit than the red team and blue team combined?

- A 20
- B 10
- C 30
- D 50



(A)