



Name _____ Class _____ Date _____

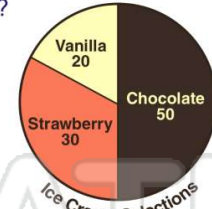
1 How many **girls** voted for **tennis** as their favorite sport?

- A 5
- B 10
- C 15
- D 7



2 Which **flavor** of ice cream was selected the **most** often?

- A chocolate
- B vanilla
- C strawberry



3 How many letters did Elly receive on **Thursday**?

- A 2
- B 3



4 How much does it cost to buy an **apple** at Sam's Snack Shop?

- A \$0.50
- B \$0.75

Menu at Sam's Snack Shop


Food Item	Price
Apple	\$0.75



PREVIEW

Please [Sign In](#) or [Sign Up](#) to download the printable version of this worksheet

5
B Science
C Social Studies
D Language Arts



- B \$1.35
- C \$1.40
- D \$1.30




9 According to the following chart, **Devon's birthday** is in _____.

- A November
- B April
- C December
- D June

Name	Grade	Birthday Month
Amy	3rd	November
Becky	4th	April
Carl	5th	June
Devon	6th	December

10 According to this pictograph, how many goals did **Fred** score in **July**?

- A 4
- B 8
- C 6
- D 12

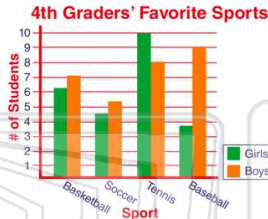




Name _____ Class _____ Date _____

1 How many **girls** voted for **tennis** as their favorite sport?

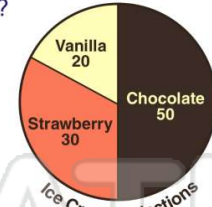
- A 5
- B 10
- C 15
- D 7



(B)

2 Which **flavor** of ice cream was selected the **most** often?

- A chocolate
- B vanilla
- C strawberry



(A)

3 How many letters did Elly receive on **Thursday**?

- A 2
- B 3



(C)

4 How much does it cost to buy an **apple** at Sam's Snack Shop?

- A \$0.50
- B \$0.75



(C)

5




(A)

PREVIEW

Please [Sign In](#) or [Sign Up](#) to download the printable version of this worksheet

7

- B Science
- C Social Studies
- D Language Arts



- B \$1.35
- C \$1.40
- D \$1.30



(B)

9 According to the following chart, **Devon's birthday** is in _____.

- A November
- B April
- C December
- D June

Name	Grade	Birthday Month
Amy	3rd	November
Becky	4th	April
Carl	5th	June
Devon	6th	December

(C)

10 According to this pictograph, how many goals did **Fred** score in **July**?

- A 4
- B 8
- C 6
- D 12



(B)