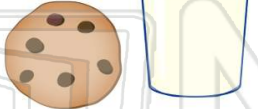




Name _____ Class _____ Date _____

1 Which **customary unit of measurement** is used to measure how much milk is in a **glass**?

- A cup
- B quart
- C gallon
- D pint



2 Which **metric unit** is used to measure the **distance** from **one wall of your bedroom to the other wall**?

- A millimeter
- B centimeter
- C kilometer
- D meter



3 Which **unit** is **not** used to measure **length**?

- A mile
- B inch



4 Which is the best **estimate** for the **length of a pencil**?

- A 5 pounds
- B 5 inches



5



PREVIEW

Please [Sign In](#) or [Sign Up](#) to download the printable version of this worksheet

7

- A millimeter
- B liter
- C gram
- D centimeter

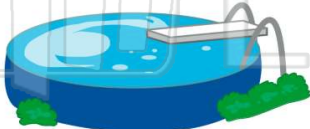


- C pint
- D ton



9 If you want to measure how **deep** your swimming pool is, which **customary unit of measurement** would you use?

- A foot
- B ounce
- C cup
- D pint



10 Which **metric unit** would you use to measure the **length** of a worm?

- A meter
- B gram
- C liter
- D centimeter





Name _____ Class _____ Date _____

1 Which **customary unit of measurement** is used to measure how much milk is in a **glass**?

- A cup
- B quart
- C gallon
- D pint



(A)

2 Which **metric unit** is used to measure the **distance** from **one wall of your bedroom to the other wall**?

- A millimeter
- B centimeter
- C kilometer
- D meter



(D)

3 Which **unit** is **not** used to measure **length**?

- A mile
- B inch



(C)

4 Which is the best **estimate** for the **length of a pencil**?

- A 5 pounds
- B 5 inches



(B)

5



(A)

PREVIEW

Please [Sign In](#) or [Sign Up](#) to download the printable version of this worksheet

7

- A millimeter
- B liter
- C gram
- D centimeter



(C)

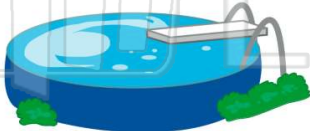
- C pint
- D ton



(C)

9 If you want to measure how **deep** your swimming pool is, which **customary unit of measurement** would you use?

- A foot
- B ounce
- C cup
- D pint



(A)

10 Which **metric unit** would you use to measure the **length** of a worm?

- A meter
- B gram
- C liter
- D centimeter



(D)