




Name _____ Class _____ Date _____

1 Which **customary unit of measurement** would you use to measure **how far** a football player ran down the field?

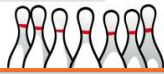


A inch
B yard
C ton
D gallon

2 Which of the following is a **unit** of the **customary system**?


A millimeter
B gram
C quart
D liter

3 If you wanted to measure the **weight** of a bowling ball, which **metric unit** would you use?



A kilogram

4 If you wanted to measure the **weight** of a truck, which **customary unit of measurement** would you use?



A pound

5



PREVIEW

7 Please [Sign In](#) or [Sign Up](#) to download the printable version of this worksheet


B ton
C yard
D pound



B yard
C pound
D pint



9 Which **metric unit** would you use to measure a **pitcher** of orange juice?



A meter
B gram
C liter
D centimeter

10 What is the best **estimate** of the **weight** of a **newborn baby**?




A 7 tons
B 7 inches
C 7 ounces
D 7 pounds



Name _____ Class _____ Date _____

1 Which **customary unit of measurement** would you use to measure **how far** a football player ran down the field? (B)

A inch C ton
B yard D gallon




2 Which of the following is a **unit of the customary system**? (C)

A millimeter
B gram
C quart
D liter

3 If you wanted to measure the **weight** of a bowling ball, which **metric unit** would you use? (A)

A kilogram



4 If you wanted to measure the **weight** of a truck, which **customary unit of measurement** would you use? (B)

A pound



5 (C)



PREVIEW

Please [Sign In](#) or [Sign Up](#) to download the printable version of this worksheet

7 (B)

B ton
C yard
D pound




B yard
C pound
D pint



9 Which **metric unit** would you use to measure a **pitcher** of orange juice? (C)

A meter
B gram
C liter
D centimeter



10 What is the best **estimate** of the **weight** of a newborn baby? (D)

A 7 tons
B 7 inches
C 7 ounces
D 7 pounds

