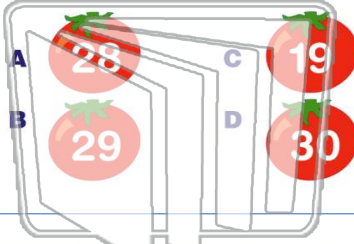




Name \_\_\_\_\_ Class \_\_\_\_\_ Date \_\_\_\_\_

1 Marcus has 232 tomato plants. He plants them in rows with 8 plants in each row. How many rows can he plant?



2 There are 23 students in Mrs. Holly's class. She gave her class a jar of candy with 328 pieces. How many pieces of candy will each student receive if Mrs. Holly shares the candy equally among the students?

- A 15
- B 13
- C 14
- D 9



3 Mrs. King is organizing a trip to the zoo for 110 students, teachers, and parents. If each bus can seat 25 people, how many buses does she need?

4 A ride at the amusement park holds 30 people. There are 390 people waiting for a ride. How many times will the roller coaster need to run to get all 390 people?



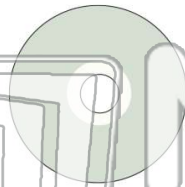
# PREVIEW

Please [Sign In](#) or [Sign Up](#) to download the printable version of this worksheet

7 tax. If Jason had \$30, how many CDs could Jason buy?

- A 5
- B 2
- C 6
- D 4

30.00  
÷ 7.5



classroom where four students can sit at each table. How many tables will Mr. Hill need?

- A 9
- B 7
- C 8
- D 6

30 ÷ 4 =

9 Mark and his father drove 573 miles to see Mark's grandmother. It took 2 days for them to get to their destination. How many miles did they drive each day?

- A 289
- B 290
- C 298
- D 278



10 Tom sold 140 boxes of candy for the school fund-raiser. The total amount of money Tom collected from his sales was \$980. What was the price of each box of candy Tom sold?

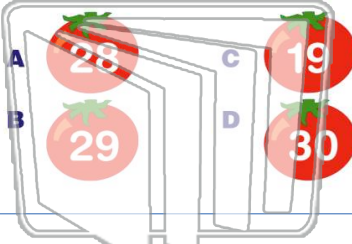
- A \$3
- B \$11
- C \$7
- D \$9

\$980  
÷ 140  
?



Name \_\_\_\_\_ Class \_\_\_\_\_ Date \_\_\_\_\_

1 Marcus has 232 tomato plants. He plants them in rows with 8 plants in each row. How many rows can he plant?



2 There are 23 students in Mrs. Holly's class. She gave her class a jar of candy with 328 pieces. How many pieces of candy will each student receive if Mrs. Holly shares the candy equally among the students?

- A 15
- B 13
- C 14
- D 9



3 Mrs. King is organizing a trip to the zoo for 110 students, teachers, and parents. If each bus can seat 25 people, how many buses does she need?

4 A ride at the amusement park holds 30 people. There are 390 people waiting for a ride. How many times will the roller coaster need to run to get all 390 people on?

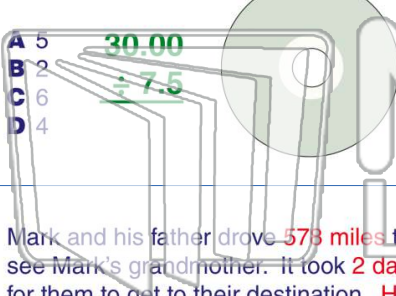


5

**PREVIEW**

Please [Sign In](#) or [Sign Up](#) to download the printable version of this worksheet

7 tax. If Jason had \$30, how many CDs could Jason buy?



classroom where four students can sit at each table. How many tables will Mr. Hill need?

- A 9
- B 7
- C 8
- D 6

$30 \div 4 =$

9 Mark and his father drove 573 miles to see Mark's grandmother. It took 2 days for them to get to their destination. How many miles did they drive each day?

- A 289
- B 290
- C 298
- D 278



10 Tom sold 140 boxes of candy for the school fund-raiser. The total amount of money Tom collected from his sales was \$980. What was the price of each box of candy Tom sold?

- A \$3
- B \$11
- C \$7
- D \$9

$\frac{\$980}{\div 140}$

?