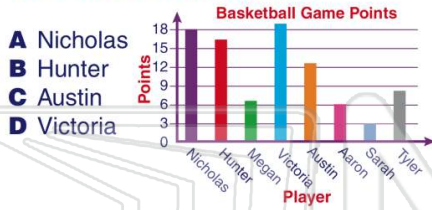


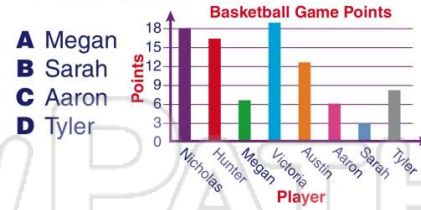


Name _____ Class _____ Date _____


1 Use the graph to answer the question.
Who scored the **most** points?



2 Use the graph to answer the question.
Which player scored **below** 6 points?



3 Which piece or pieces of rope are **more than 18 feet** long but **less than 21 feet** long?



4 If it takes nine inches of rope to go around the fence post, how many times will the **red rope** go around the post?



PREVIEW

Please [Sign In](#) or [Sign Up](#) to download the printable version of this worksheet

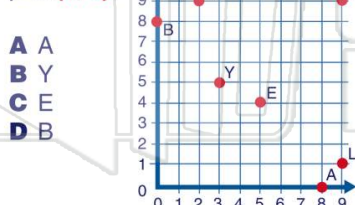
- 7
- B** 68%
 - C** 35%
 - D** 58%



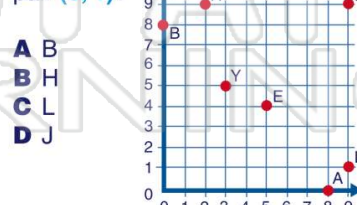
D 18

3	447
4	00158
5	35556
6	2

9 What letter represents the ordered pair **(8, 0)**?



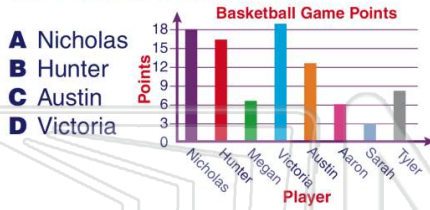
10 What letter represents the ordered pair **(9, 1)**?





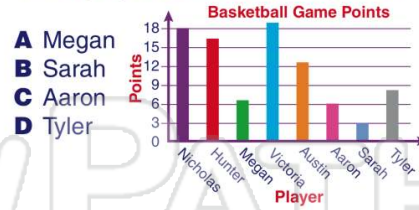
Name _____ Class _____ Date _____

1 Use the graph to answer the question.
Who scored the **most** points?



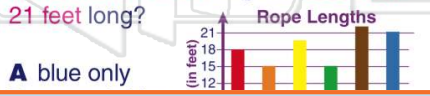
(D)

2 Use the graph to answer the question.
Which player scored **below** 6 points?



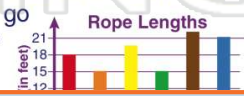
(B)

3 Which piece or pieces of rope are **more than 18 feet** long but **less than 21 feet** long?



(C)

4 If it takes nine inches of rope to go around the fence post, how many times will the **red rope** go around the post?



(B)


5

PREVIEW

Please [Sign In](#) or [Sign Up](#) to download the printable version of this worksheet

7

- B** 68%
- C** 35%
- D** 58%

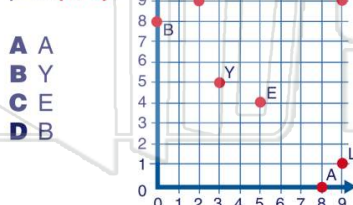


D 18

3	447
4	00158
5	35556
6	2

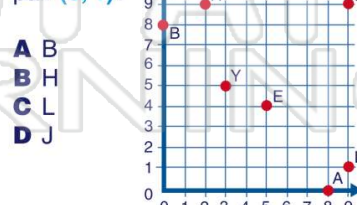
(C)

9 What letter represents the ordered pair **(8, 0)**?



(A)

10 What letter represents the ordered pair **(9, 1)**?



(C)