

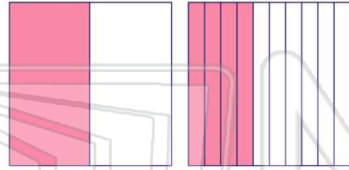


Name _____ Class _____ Date _____

1 Compare using the symbols $<$, $>$, $=$.

$\frac{1}{2}$ ● 0.50

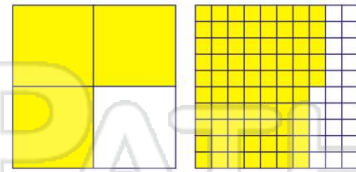
A $<$
B $>$
C $=$



2 Compare using the symbols $<$, $>$, $=$.

$\frac{3}{4}$ ● 0.75

A $<$
B $>$
C $=$



3 Compare using the symbols $<$, $>$, $=$.

$\frac{3}{4}$ ● 0.33



4 Compare using the symbols $<$, $>$, $=$.

$\frac{1}{3}$ ● 0.66




PREVIEW

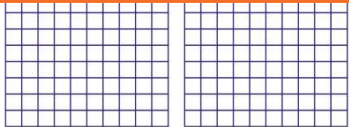
Please [Sign In](#) or [Sign Up](#) to download the printable version of this worksheet

7

A $<$
B $>$
C $=$



A $<$
B $>$
C $=$



9 Compare using the symbols $<$, $>$, $=$.

$\frac{1}{8}$ ● 1.25

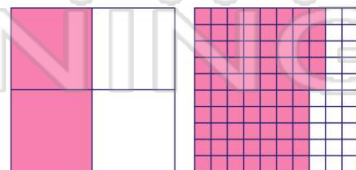
A $<$
B $>$
C $=$



10 Compare using the symbols $<$, $>$, $=$.

$\frac{2}{4}$ ● 0.75

A $<$
B $>$
C $=$





Less Than, Greater Than

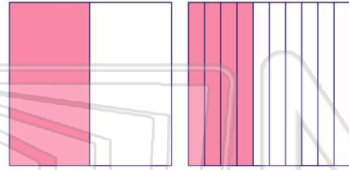
Math

Name _____ Class _____ Date _____

1 Compare using the symbols $<$, $>$, $=$.

$\frac{1}{2}$ ● 0.50

A <
B >
C =

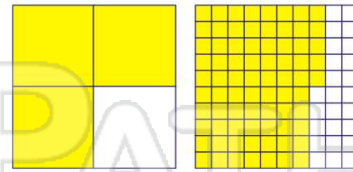


(C)

2 Compare using the symbols $<$, $>$, $=$.

$\frac{3}{4}$ ● 0.75

A <
B >
C =



(C)

3 Compare using the symbols $<$, $>$, $=$.

$\frac{3}{4}$ ● 0.33



(B)

4 Compare using the symbols $<$, $>$, $=$.

$\frac{1}{3}$ ● 0.66



(A)



PREVIEW

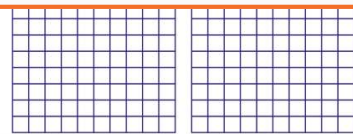
Please [Sign In](#) or [Sign Up](#) to download the printable version of this worksheet

7 (C)

A <
B >
C =



A <
B >
C =



9 Compare using the symbols $<$, $>$, $=$.

$\frac{1}{8}$ ● 1.25

A <
B >
C =

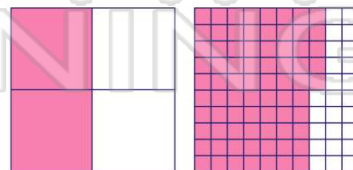


(A)

10 Compare using the symbols $<$, $>$, $=$.

$\frac{2}{4}$ ● 0.75

A <
B >
C =



(A)