



Name _____ Class _____ Date _____

1 Find the answer in **simplest form**.

$$\begin{array}{r} 2 \text{ gal } 3 \text{ qt} \\ + 4 \text{ gal } 3 \text{ qt} \\ \hline \end{array}$$

- A 6 gal 6 qt
- B 7 gal 2 qt
- C 6 gal 2 qt
- D 7 gal 6 qt



2 Find the answer in **simplest form**.

$$\begin{array}{r} 6 \text{ pt } 1 \text{ c} \\ - 4 \text{ pt } 3 \text{ c} \\ \hline \end{array}$$

- A 2 pt 2 c
- B 2 pt
- C 1 pt
- D 1 pt 4 c



3 Find the answer in **simplest form**.

$$\begin{array}{r} 3 \text{ c } 6 \text{ fl oz} \\ + 2 \text{ c } 6 \text{ fl oz} \\ \hline \end{array}$$



4 There are 2 tablespoons in 1 fluid ounce. How many ounces are there in 14 tablespoons?

- A 7 fl oz

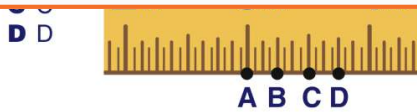
5



PREVIEW

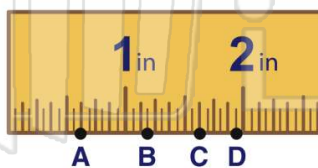
Please [Sign In](#) or [Sign Up](#) to download the printable version of this worksheet

7



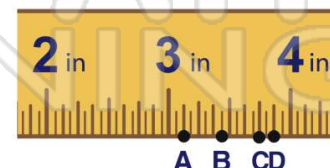
9 What letter indicates $1 \frac{5}{8}$ inch?

- A A
- B B
- C C
- D D



10 What letter indicates $3 \frac{7}{8}$ inch?

- A A
- B B
- C C
- D D



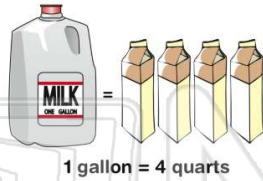


Name _____ Class _____ Date _____

1 Find the answer in **simplest form**.

$$\begin{array}{r} 2 \text{ gal } 3 \text{ qt} \\ + 4 \text{ gal } 3 \text{ qt} \\ \hline \end{array}$$

- A 6 gal 6 qt
- B 7 gal 2 qt
- C 6 gal 2 qt
- D 7 gal 6 qt



(B)

2 Find the answer in **simplest form**.

$$\begin{array}{r} 6 \text{ pt } 1 \text{ c} \\ - 4 \text{ pt } 3 \text{ c} \\ \hline \end{array}$$

- A 2 pt 2 c
- B 2 pt
- C 1 pt
- D 1 pt 4 c



(C)

3 Find the answer in **simplest form**.

$$\begin{array}{r} 3 \text{ c } 6 \text{ fl oz} \\ + 2 \text{ c } 6 \text{ fl oz} \\ \hline \end{array}$$



(D)

4 There are 2 tablespoons in 1 fluid ounce. How many ounces are there in 14 tablespoons?

- A 7 fl oz

(A)

5



(B)

PREVIEW

Please [Sign In](#) or [Sign Up](#) to download the printable version of this worksheet

7

D D



D M

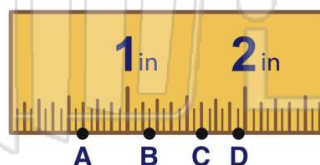


(D)

9

What letter indicates $1 \frac{5}{8}$ inch?

- A A
- B B
- C C
- D D

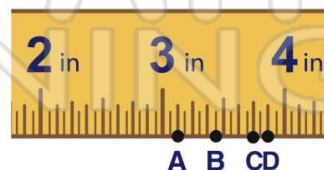


(C)

10

What letter indicates $3 \frac{7}{8}$ inch?

- A A
- B B
- C C
- D D



(D)