




Name \_\_\_\_\_ Class \_\_\_\_\_ Date \_\_\_\_\_

1 Multiply:  $319 \times 416 =$

- A 162,656
- B 147,059
- C 132,704
- D 1,248



2 Multiply:  $223 \times 100 =$

- A 2,223
- B 22,300
- C 1,223
- D 323



3 Multiply:  $500 \times 100 =$

- A 50,000

4 Multiply:  $200 \times 460 =$

- A 860

5

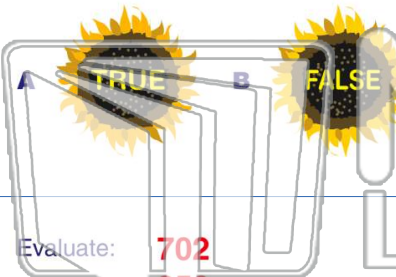


## PREVIEW

Please [Sign In](#) or [Sign Up](#) to download the printable version of this worksheet

7

True or false?



Evaluate:

$$\begin{array}{r} 702 \\ \times 250 \\ \hline 1,800 \end{array}$$

True or false?

- A true
- B false

$$\begin{array}{r} \times 210 \\ 120,750 \end{array}$$

True or false?

- A true
- B false

9

10

Evaluate:

$$\begin{array}{r} 890 \\ \times 120 \\ \hline 106,800 \end{array}$$

True or false?


- A true
- B false



Name \_\_\_\_\_ Class \_\_\_\_\_ Date \_\_\_\_\_

1 Multiply:  $319 \times 416 =$

- A 162,656
- B 147,059
- C 132,704
- D 1,248



2 Multiply:  $223 \times 100 =$

- A 2,223
- B 22,300
- C 1,223
- D 323



3 Multiply:  $500 \times 100 =$

- A 50,000

4 Multiply:  $200 \times 460 =$

- A 860

5

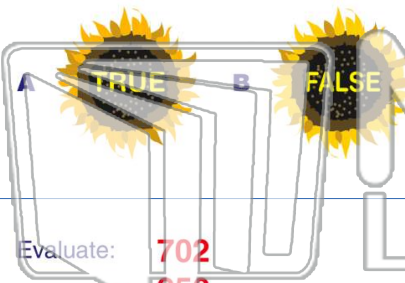


## PREVIEW

Please [Sign In](#) or [Sign Up](#) to download the printable version of this worksheet

7

True or false?



Evaluate:

$$\begin{array}{r} 702 \\ \times 250 \\ \hline 1,800 \end{array}$$

True or false?

- A true
- B false

$$\begin{array}{r} \times 210 \\ 120,750 \end{array}$$

True or false?

- A true
- B false

9

Evaluate:

$$\begin{array}{r} 702 \\ \times 250 \\ \hline 1,800 \end{array}$$

True or false?

- A true
- B false

10

Evaluate:

$$\begin{array}{r} 890 \\ \times 120 \\ \hline 106,800 \end{array}$$

True or false?

- A true
- B false