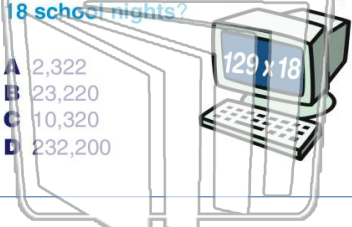




Name _____ Class _____ Date _____

1 Every school night, James spends **129 minutes** eating dinner, doing his homework, and reading his book. **How many minutes will he have spent doing these things after 18 school nights?**

- A 2,322
- B 23,220
- C 10,320
- D 232,200



2 **Every day** the people at Helen's Hot Dog World make **60 hot dogs** for their customers. **How many hot dogs do they make in a year?**

- A 365
- B 2,400
- C 204,960
- D 21,900



3 Kate practices playing her flute **45 minutes four days per week**. **How many minutes does she spend practicing in a year?**

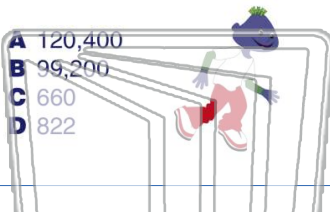
4 Suzie spends **32 minutes** riding the bus to school per day. **How many minutes does she spend riding the bus in a school year if there are 176 school days?**



5 **PREVIEW**
Please [Sign In](#) or [Sign Up](#) to download the printable version of this worksheet

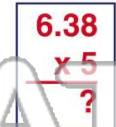
7 **8 weeks**. **How many laps did the fifth grade students run last year?**

- A 120,400
- B 99,200
- C 660
- D 822



How many minutes would it take Jessica to run 6.38 miles?

- A 0.319
- B 31.9
- C 3.19
- D 319




9 At the local ice cream shop, ice cream cones are sold for **\$0.85** each. Over the weekend all **328 ice cream cones** were sold. **How much money was made from the sale of ice cream cones?**

- A \$5,338.00
- B \$533.80
- C \$628.75
- D \$0.85



10 Miguel jogs **6.21 miles** each day, five days a week. **How many miles would Miguel run in 50 days?**

- A 3.105
- B 31.05
- C 3,105
- D 310.5

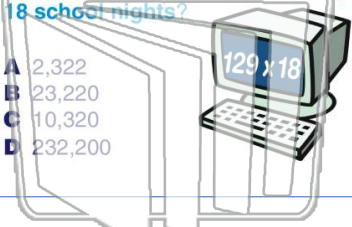




Name _____ Class _____ Date _____

1 Every school night, James spends **129 minutes** eating dinner, doing his homework, and reading his book. **How many minutes will he have spent doing these things after 18 school nights?**

- A 2,322
- B 23,220
- C 10,320
- D 232,200



2 **Every day** the people at Helen's Hot Dog World make **60 hot dogs** for their customers. **How many hot dogs do they make in a year?**

- A 365
- B 2,400
- C 204,960
- D 21,900



3 Kate practices playing her flute **45 minutes four days per week**. **How many minutes does she spend practicing in a year?**

4 Suzie spends **32 minutes** riding the bus to school per day. **How many minutes does she spend riding the bus in a school year if there are 176 school days?**

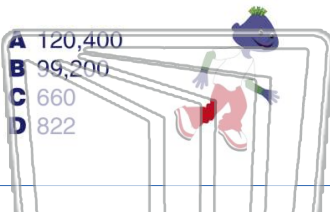


PREVIEW

Please [Sign In](#) or [Sign Up](#) to download the printable version of this worksheet

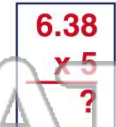
7 **8 weeks**. **How many laps did the fifth grade students run last year?**

- A 120,400
- B 99,200
- C 660
- D 822



How many minutes would it take Jessica to run 6.38 miles?

- A 0.319
- B 31.9
- C 3.19
- D 319



9 At the local ice cream shop, ice cream cones are sold for **\$0.85** each. Over the weekend all **328 ice cream cones** were sold. **How much money was made from the sale of ice cream cones?**

- A \$5,338.00
- B \$533.80
- C \$628.75
- D \$0.85



10 Miguel jogs **6.21 miles** each day, five days a week. **How many miles would Miguel run in 50 days?**

- A 3.105
- B 31.05
- C 3,105
- D 310.5

