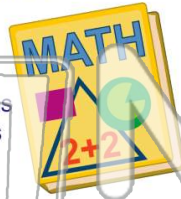




Name _____ Class _____ Date _____

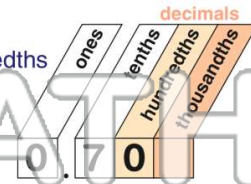
1 The decimal **0.31** is read as _____.

- A thirty-one
- B thirty-one thousandths
- C thirty-one hundredths
- D thirty-one tenths



2 The decimal **0.7** is read as _____.

- A seven tenths
- B seven hundredths
- C seven thousandths
- D seven



3 The decimal **0.002** is read as _____.



4 The decimal **9.075** is read as _____.



PREVIEW

Please [Sign In](#) or [Sign Up](#) to download the printable version of this worksheet

7

- A six and one hundred fifty thousandths
- B six and one hundred fifty tenths
- C six and one hundred fifty
- D six and one hundred fifty hundredths

- A nine hundred ninety-nine hundredths
- B nine hundred ninety-nine tenths
- C nine hundred ninety-nine thousandths
- D nine hundred ninety-nine

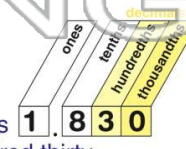
9 The decimal **2.45** is read as _____.

- A two and forty-five tenths
- B two and forty-five thousandths
- C two and forty-five
- D two and forty-five hundredths



10 The decimal **1.830** is read as _____.

- A one and eight hundred thirty tenths
- B one and eight hundred thirty thousandths
- C one and eight hundred thirty
- D one and eight hundred thirty hundredths





Ordering Decimals

Name _____ Class _____ Date _____

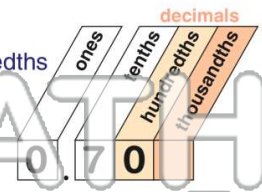
1 The decimal **0.31** is read as _____.

- A thirty-one
- B thirty-one thousandths
- C thirty-one hundredths
- D thirty-one tenths

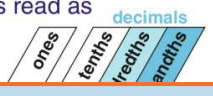


2 The decimal **0.7** is read as _____.

- A seven tenths
- B seven hundredths
- C seven thousandths
- D seven



3 The decimal **0.002** is read as _____.



4 The decimal **9.075** is read as _____.

5



PREVIEW

Please [Sign In](#) or [Sign Up](#) to download the printable version of this worksheet

7

- A six and one hundred fifty thousandths
- B six and one hundred fifty tenths
- C six and one hundred fifty
- D six and one hundred fifty hundredths

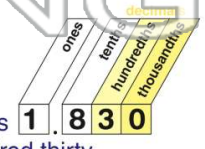


- A nine hundred ninety-nine hundredths
- B nine hundred ninety-nine tenths
- C nine hundred ninety-nine thousandths
- D nine hundred ninety-nine

10

The decimal **1.830** is read as _____.

- A one and eight hundred thirty tenths
- B one and eight hundred thirty thousandths
- C one and eight hundred thirty
- D one and eight hundred thirty hundredths



9

The decimal **2.45** is read as _____.

- A two and forty-five tenths
- B two and forty-five thousandths
- C two and forty-five
- D two and forty-five hundredths