




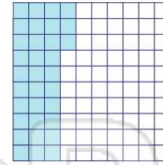
Name _____ Class _____ Date _____

1 What fraction is equal to 6%?



- A $\frac{6}{10}$ B $\frac{1}{6}$ C $\frac{6}{100}$ D $\frac{6}{1000}$

2 What fraction is equal to 33%?



- A $\frac{33}{10}$ B $\frac{33}{100}$ C $\frac{2}{3}$ D $\frac{3}{1}$

3 What decimal is equal to 10%?

- A 0.1
B 1.00
C 10.0



4 What decimal is equal to 40%?

- A 0.004
B 4.0
C 0.40



5




PREVIEW


Please [Sign In](#) or [Sign Up](#) to download the printable version of this worksheet

7

D 8.20

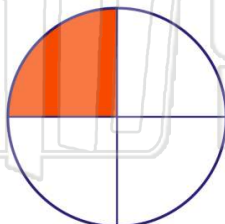


D 0.091



9 What decimal is equal to 25%?

- A 0.025
B 0.25
C 25.0
D 0.0025



10 What decimal is equal to 75%?


- A 75.0
B 0.075
C 0.0075
D 0.75





Name _____ Class _____ Date _____

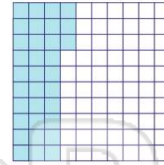
1 What fraction is equal to 6%?



- A $\frac{6}{10}$
- B $\frac{1}{6}$
- C $\frac{6}{100}$
- D $\frac{6}{1000}$

(C)

2 What fraction is equal to 33%?



- A $\frac{33}{10}$
- B $\frac{33}{100}$
- C $\frac{2}{3}$
- D $\frac{3}{1}$

(B)

3 What decimal is equal to 10%?

- A 0.1
- B 1.00
- C 10.0



(A)

4 What decimal is equal to 40%?

- A 0.004
- B 4.0
- C 0.40



(C)

5




(C)

PREVIEW


Please [Sign In](#) or [Sign Up](#) to download the printable version of this worksheet

7

D 8.20



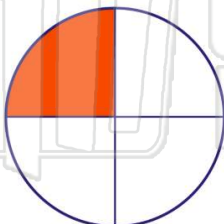
D 0.091



(C)

9 What decimal is equal to 25%?


- A 0.025
- B 0.25
- C 25.0
- D 0.0025



(B)

10 What decimal is equal to 75%?

- A 75.0
- B 0.075
- C 0.0075
- D 0.75



(D)