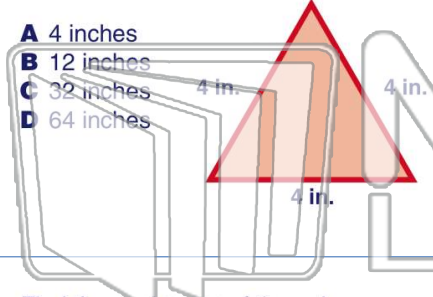




Name _____ Class _____ Date _____

1 Find the **perimeter** of this polygon.

- A 4 inches
- B 12 inches
- C 32 inches
- D 64 inches




2 What is the **perimeter** of this polygon?

- A 14.5 meters
- B 27.04 meters
- C 29 meters
- D 1.5 meters



3 Find the **perimeter** of the polygon.



4 Find the **perimeter** of the polygon.

- A 1.2 millimeters



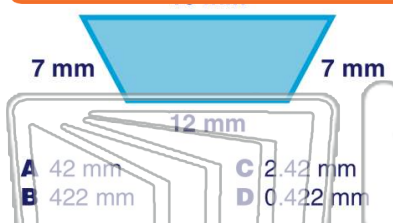
5



PREVIEW

Please [Sign In](#) or [Sign Up](#) to download the printable version of this worksheet

7



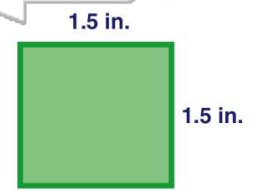
- A 42 mm
- B 422 mm
- C 2.42 mm
- D 0.422 mm

- A 30 cm
- B 22 cm
- C 15 cm
- D 2,500 cm



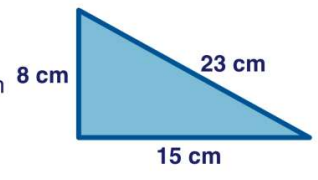
9 Find the **perimeter** of the polygon.

- A 3 inches
- B 4 inches
- C 6 inches
- D 5.06 inches



10 Find the **perimeter** of the polygon.

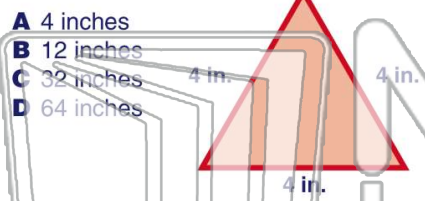
- A 46 cm
- B 327 cm
- C 5,040 cm
- D 43 cm






Name _____ Class _____ Date _____

1 Find the **perimeter** of this polygon.



- A 4 inches
- B 12 inches
- C 32 inches
- D 64 inches

2 What is the **perimeter** of this polygon?



- A 14.5 meters
- B 27.04 meters
- C 29 meters
- D 1.5 meters

3 Find the **perimeter** of the polygon.



4 Find the **perimeter** of the polygon.

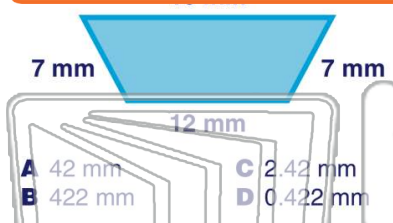
- A 1.2 millimeters



PREVIEW

Please [Sign In](#) or [Sign Up](#) to download the printable version of this worksheet

7

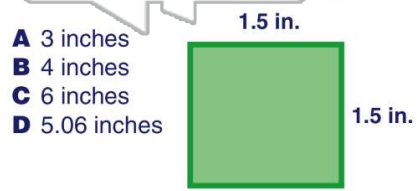


- A 42 mm
- B 422 mm
- C 2.42 mm
- D 0.422 mm



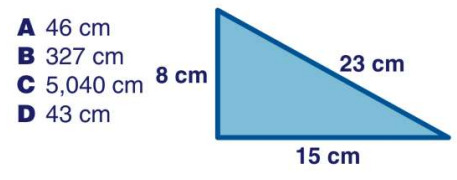
- A 30 cm
- B 22 cm
- C 15 cm
- D 2,500 cm

9 Find the **perimeter** of the polygon.



- A 3 inches
- B 4 inches
- C 6 inches
- D 5.06 inches

10 Find the **perimeter** of the polygon.



- A 46 cm
- B 327 cm
- C 5,040 cm
- D 43 cm