









Name _____ Class _____ Date _____

- 1 Which is **not** a property of a **square**?
- A All angles are equal size.
 - B All sides are equal length.
 - C Only two sides are equal length.
 - D All angles equal 360° .
- 

- 2 Identify the shape that is **not** a **polygon**.
- A 
 - B 
 - C 
 - D 

- 3 Which is **not** a property of a **polygon**?
- A Sides are curved.
 - B All lines connect.
 - C Lines do not cross.
- 

- 4 Which is **not** a property of a **rectangle**?
- A All angles are equal size.
 - B Opposite sides
- 




PREVIEW

7 Please [Sign In](#) or [Sign Up](#) to download the printable version of this worksheet

- the same length.
- C Opposite sides are parallel.
- D No angles are right angles.

- B There are always three sides.
- C There is one pair of parallel sides.
- D There are always three angles.

- 9 Squares are a type of rectangle.
True or false?



- 10 Rectangles can be squares.
True or false?





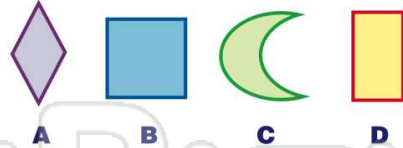
Name _____ Class _____ Date _____

- 1 Which is **not** a property of a **square**?
- A All angles are equal size.
 - B All sides are equal length.
 - C Only two sides are equal length.
 - D All angles equal 360° .



(C)

- 2 Identify the shape that is **not** a **polygon**.



(C)

- 3 Which is **not** a property of a **polygon**?
- A Sides are curved.
 - B All lines connect.
 - C Lines do not cross.



(A)

- 4 Which is **not** a property of a **rectangle**?
- A All angles are equal size.
 - B Opposite sides



(D)



(B)

PREVIEW


7 Please [Sign In](#) or [Sign Up](#) to download the printable version of this worksheet

(C)

- the same length.
- C Opposite sides are parallel.
 - D No angles are right angles.

- B There are always three sides.
- C There is one pair of parallel sides.
- D There are always three angles.

- 9 Squares are a type of rectangle.
True or false?



(A)

- 10 Rectangles can be squares.
True or false?



(B)