



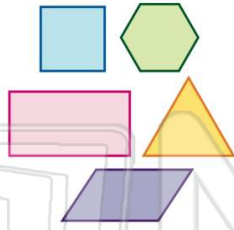
Name _____ Class _____ Date _____

1

All polygons have four sides.

True or false?

- A true
- B false

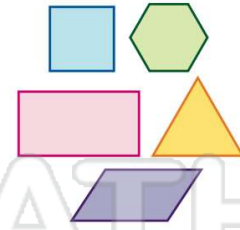


2

All angles of polygons equal 180° .

True or false?

- A true
- B false



3

The angles of a rhombus are all equal.

True or false?

- A true



4

A circle can be a polygon.

True or false?

- A true



5



PREVIEW

Please [Sign In](#) or [Sign Up](#) to download the printable version of this worksheet

7

- B false




- D trapezoid



9

Identify the **polygon**.

- A rhombus
- B rectangle
- C triangle
- D trapezoid



10

Identify the **polygon**.

- A hexagon
- B pentagon
- C rhombus
- D trapezoid





Name _____ Class _____ Date _____

1 All polygons have four sides.
True or false?
A true
B false

(B)

2 All angles of polygons equal 180°.
True or false?
A true
B false

(B)

3 The angles of a rhombus are all equal.
True or false?
A true

(B)

4 A circle can be a polygon.
True or false?
A true

(B)



PREVIEW

Please [Sign In](#) or [Sign Up](#) to download the printable version of this worksheet

7

B false

D trapezoid

(B)

9 Identify the **polygon**.
A rhombus
B rectangle
C triangle
D trapezoid

(C)

10 Identify the **polygon**.
A hexagon
B pentagon
C rhombus
D trapezoid

(B)