



Name _____ Class _____ Date _____

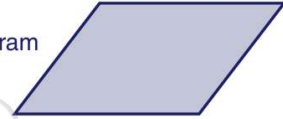
1 Identify the **polygon**.

- A parallelogram
- B rectangle
- C rhombus
- D trapezoid



2 Identify the **polygon**.

- A square
- B parallelogram
- C rhombus
- D rectangle



3 Identify the **polygon**.

- A circle
- B hexagon
- C octagon



4 Identify the shape that is **not** a **polygon**.



5



PREVIEW

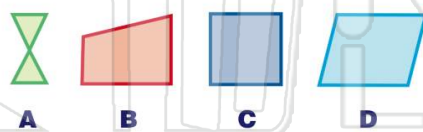
Please [Sign In](#) or [Sign Up](#) to download the printable version of this worksheet

7

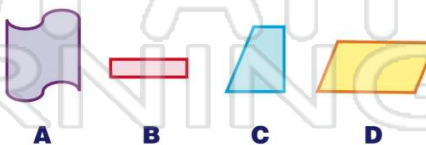
A B C D

A B C D

9 Identify the shape that is **not** a **polygon**.



10 Identify the shape that is **not** a **polygon**.





Name _____ Class _____ Date _____

1 Identify the **polygon**.

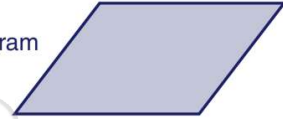
- A parallelogram
- B rectangle
- C rhombus
- D trapezoid



(D)

2 Identify the **polygon**.

- A square
- B parallelogram
- C rhombus
- D rectangle



(B)

3 Identify the **polygon**.

- A circle
- B hexagon
- C octagon



(B)

4 Identify the shape that is **not** a **polygon**.



(B)

5



(C)

PREVIEW

Please [Sign In](#) or [Sign Up](#) to download the printable version of this worksheet

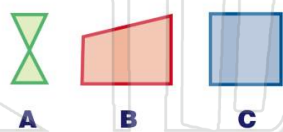
7

A B C D

A B C D

(D)

9 Identify the shape that is **not** a **polygon**.



A B C



D

(A)

10 Identify the shape that is **not** a **polygon**.



A B C D

(A)