



Polygons - Answer Key

Math

Name _____ Class _____ Date _____

1 Which is not a property of a square?

Cross it out.


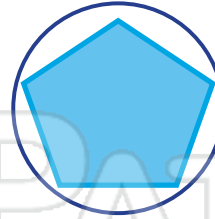
All angles are equal size.

All sides are equal length.

~~Only two sides are equal length.~~



6 Circle the pentagon.

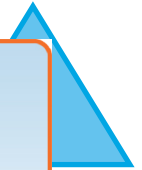


2 A polygon with **four sides** is called a quadrilateral.

True or false?



7 Cross out the shape that is not a polygon.



3



PREVIEW

4

Please [Sign In](#) or [Sign Up](#) to download the printable version of this worksheet

square

rhombus

parallelogram

rectangle

5 Circle the name of this polygon.



square

trapezoid

circle

rectangle

10 A polygon with **3 sides** is called a triangle.

