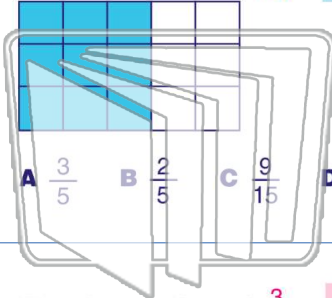




Name _____ Class _____ Date _____

1 The **simplest form** of $\frac{9}{15}$ is .



2 The **simplest form** of $\frac{7}{35}$ is .



3 The **simplest form** of $\frac{3}{27}$ is .

4 The **simplest form** of $\frac{4}{10}$ is .



5

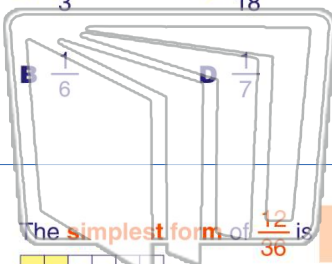


PREVIEW

Please [Sign In](#) or [Sign Up](#) to download the printable version of this worksheet

7

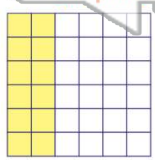
A $\frac{2}{3}$ C $\frac{3}{18}$



A $\frac{1}{6}$ C $\frac{1}{4}$

B $\frac{1}{5}$ D $\frac{1}{3}$

9 The **simplest form** of $\frac{12}{36}$ is .



A $\frac{3}{5}$ B $\frac{2}{5}$ C $\frac{1}{3}$ D $\frac{2}{3}$

10 The **simplest form** of $\frac{6}{9}$ is .

A $\frac{1}{3}$ C $\frac{6}{9}$

B $\frac{2}{3}$ D $\frac{1}{9}$



Name _____ Class _____ Date _____

1 The **simplest form** of $\frac{9}{15}$ is .

A $\frac{3}{5}$ B $\frac{2}{5}$ C $\frac{9}{15}$ D $\frac{4}{5}$

2 The **simplest form** of $\frac{7}{35}$ is .

- A $\frac{3}{5}$ C $\frac{7}{5}$
B $\frac{2}{5}$ D $\frac{1}{5}$

3 The **simplest form** of $\frac{3}{27}$ is .

4 The **simplest form** of $\frac{4}{10}$ is .

5

PREVIEW

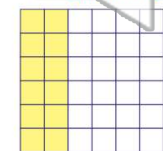
Please [Sign In](#) or [Sign Up](#) to download the printable version of this worksheet

7

A $\frac{2}{3}$ C $\frac{3}{18}$
B $\frac{1}{6}$ D $\frac{1}{7}$

9 The **simplest form** of $\frac{12}{36}$ is .

10 The **simplest form** of $\frac{6}{9}$ is .



- A $\frac{3}{5}$ B $\frac{2}{5}$ C $\frac{1}{3}$ D $\frac{2}{3}$

- A $\frac{1}{6}$ C $\frac{1}{4}$
B $\frac{1}{5}$ D $\frac{1}{3}$

- A $\frac{1}{3}$ C $\frac{6}{9}$
B $\frac{2}{3}$ D $\frac{1}{9}$