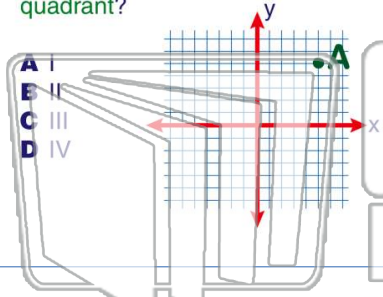


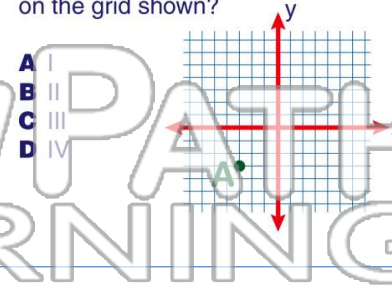


Name \_\_\_\_\_ Class \_\_\_\_\_ Date \_\_\_\_\_

1 On the grid shown, **point A** is in which quadrant?



2 **Point A** is located in which quadrant on the grid shown?



3 On the grid shown, in which quadrant is **point A**?



4 **Point A** is located in which quadrant on the grid shown?



5

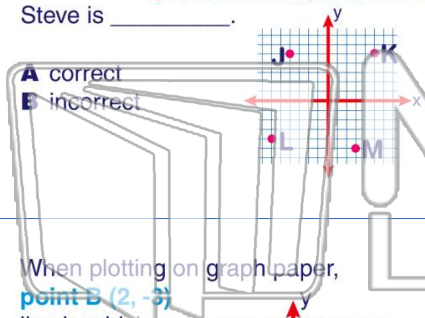


## PREVIEW

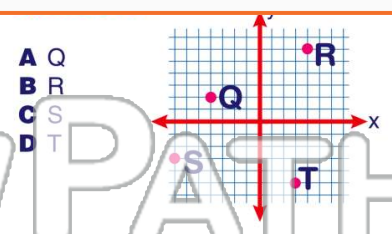
Please [Sign In](#) or [Sign Up](#) to download the printable version of this worksheet

7

decides that **point K is in quadrant II**. Steve is \_\_\_\_\_.



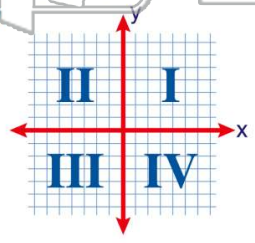
10



9

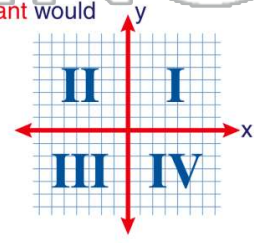
When plotting on graph paper, **point B (2, -3)** lies in which quadrant?

- A I
- B II
- C III
- D IV



Jim has to plot points on graph paper. In which quadrant would **point D (-3, 4)** be plotted?

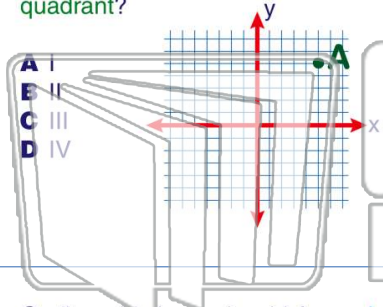
- A I
- B II
- C III
- D IV



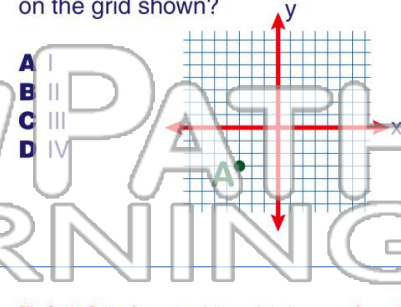


Name \_\_\_\_\_ Class \_\_\_\_\_ Date \_\_\_\_\_

1 On the grid shown, **point A** is in which quadrant?



2 **Point A** is located in which quadrant on the grid shown?



3 On the grid shown, in which quadrant is **point A**?



4 **Point A** is located in which quadrant on the grid shown?



5

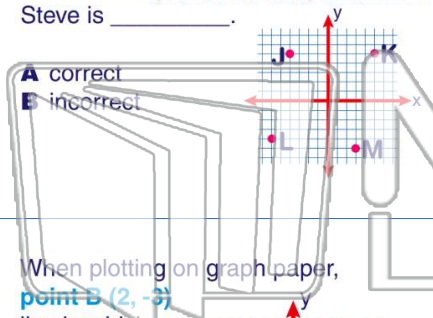


## PREVIEW

Please [Sign In](#) or [Sign Up](#) to download the printable version of this worksheet

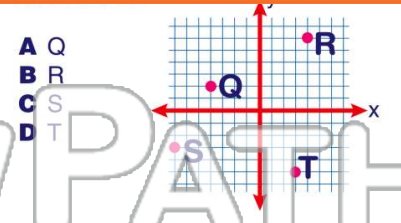
7

decides that **point K is in quadrant II**.  
Steve is \_\_\_\_\_.



10

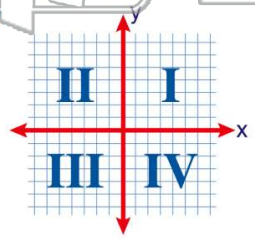
Jim has to plot points on graph paper. In which quadrant would **point D (-3, 4)** be plotted?



9

When plotting on graph paper, **point B (2, -3)** lies in which quadrant?

- A I
- B II
- C III
- D IV



- A I
- B II
- C III
- D IV

