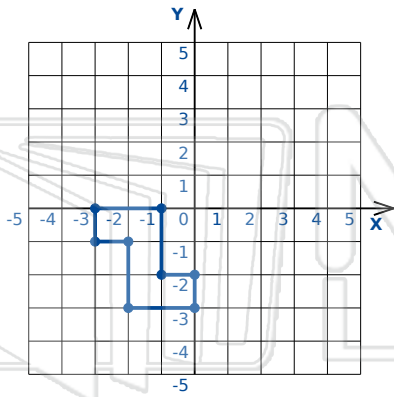




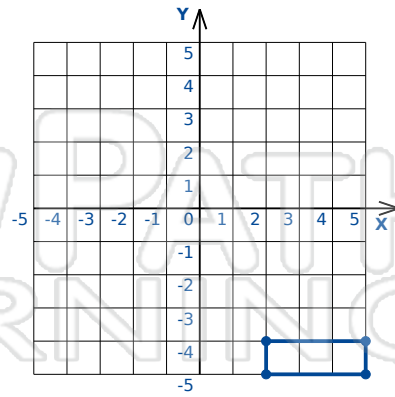
Reflections Triangles/Polygons

Math

Name _____ Class _____ Date _____



Reflection: Across the x-axis

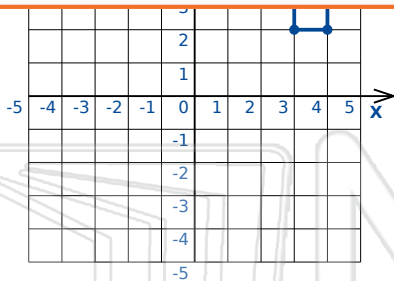


Reflection: Across the x-axis

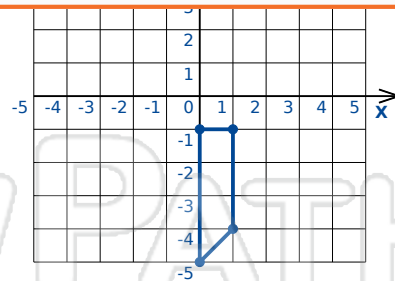


PREVIEW

Please [Sign In](#) or [Sign Up](#) to download the printable version of this worksheet



Reflection: Across Line $y = -x$



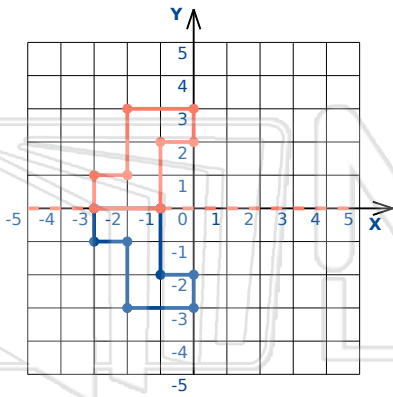
Reflection: Across the line $y = -1$



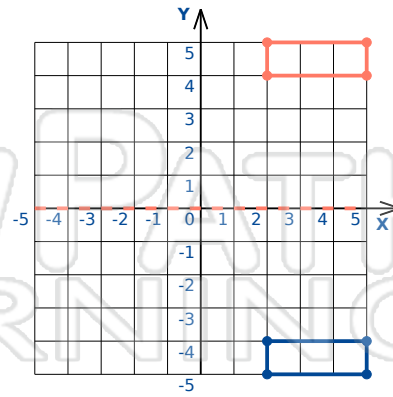
Reflections Triangles/Polygons - Answer Key

Math

Name _____ Class _____ Date _____



Reflection: Across the x-axis

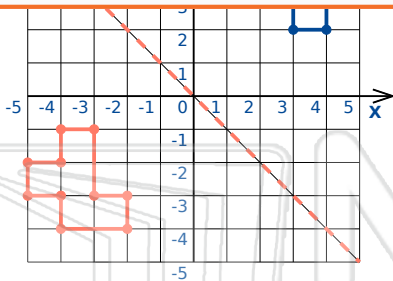


Reflection: Across the x-axis

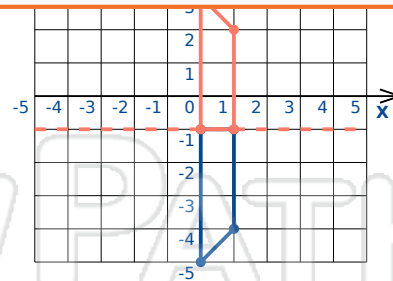


PREVIEW

Please [Sign In](#) or [Sign Up](#) to download the printable version of this worksheet



Reflection: Across Line $y = -x$



Reflection: Across the line $y = -1$