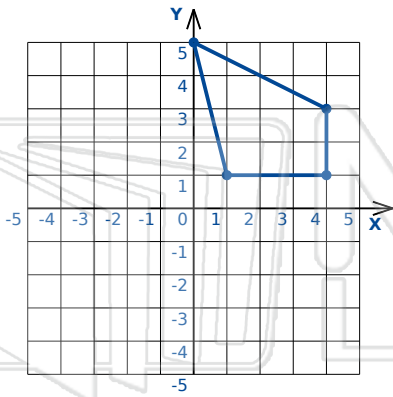




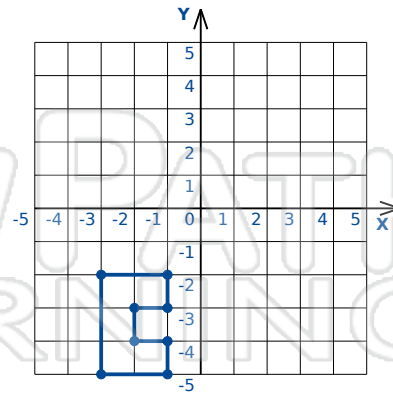
# Rotations Triangles/Polygons

Math

Name \_\_\_\_\_ Class \_\_\_\_\_ Date \_\_\_\_\_



Rotation:  $90^\circ$  clockwise about the origin

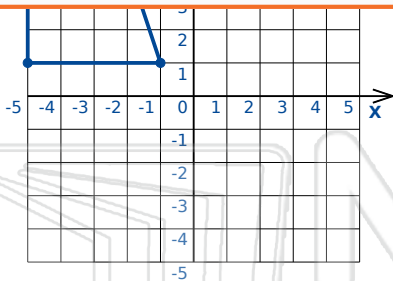


Rotation:  $90^\circ$  clockwise about the origin

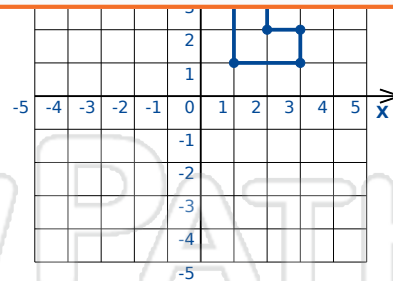


## PREVIEW

Please [Sign In](#) or [Sign Up](#) to download the printable version of this worksheet



Rotation:  $90^\circ$  ccw about the origin

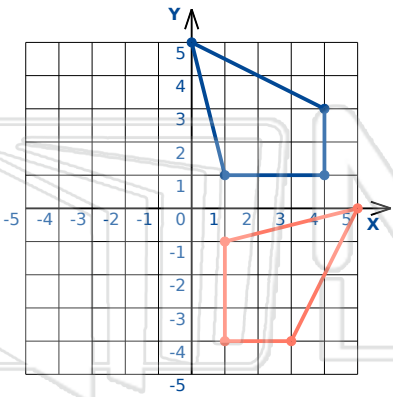


Rotation:  $90^\circ$  clockwise about the origin

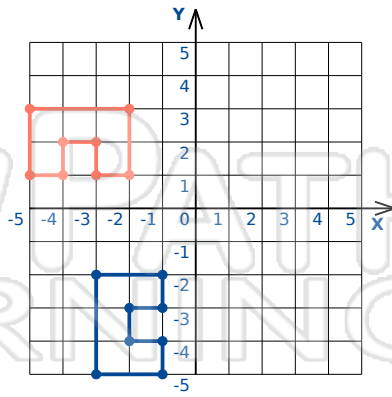


# Rotations Triangles/Polygons - Answer Key

Name \_\_\_\_\_ Class \_\_\_\_\_ Date \_\_\_\_\_



Rotation: 90° clockwise about the origin

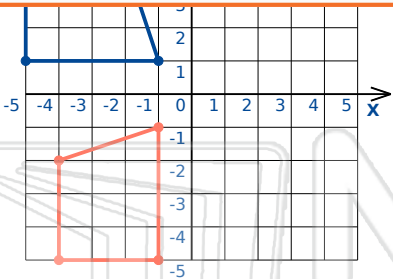


Rotation: 90° clockwise about the origin

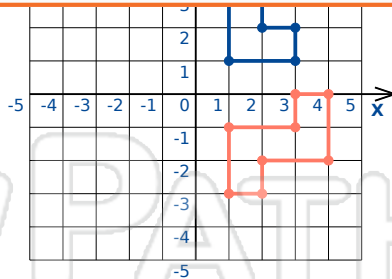


## PREVIEW

Please [Sign In](#) or [Sign Up](#) to download the printable version of this worksheet



Rotation: 90° ccw about the origin



Rotation: 90° clockwise about the origin