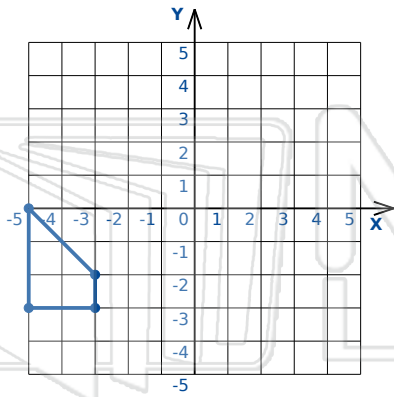




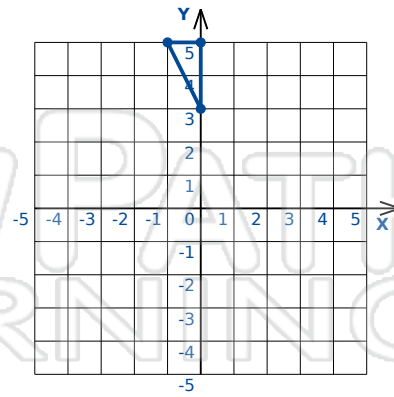
Transformations Triangles/Polygons

Math

Name _____ Class _____ Date _____



Rotation: 90° clockwise about the origin

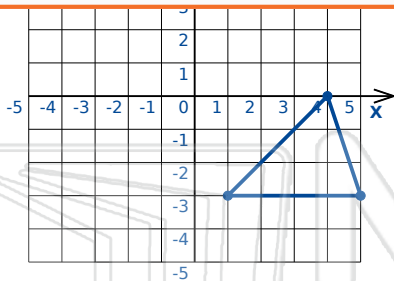


Translation: 2 right and 2 down

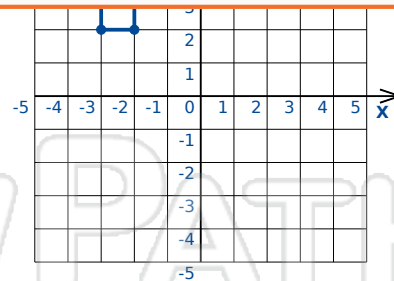


PREVIEW

Please [Sign In](#) or [Sign Up](#) to download the printable version of this worksheet



Rotation: 180° clockwise about the origin



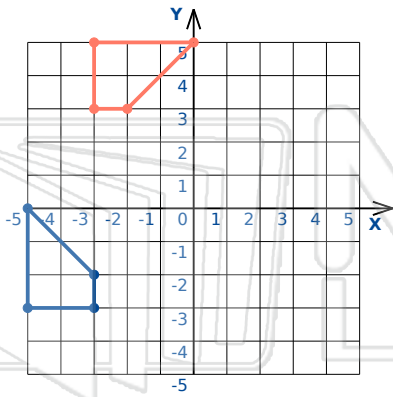
Reflection: Across Line $y = x$



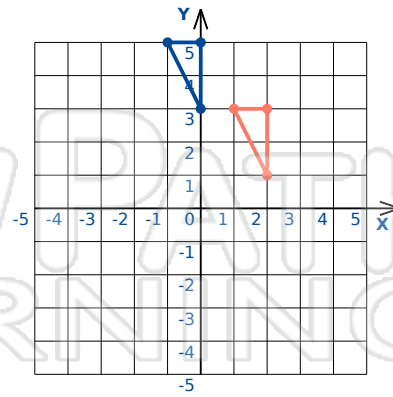
Transformations Triangles/Polygons - Answer Key

Math

Name _____ Class _____ Date _____



Rotation: 90° clockwise about the origin

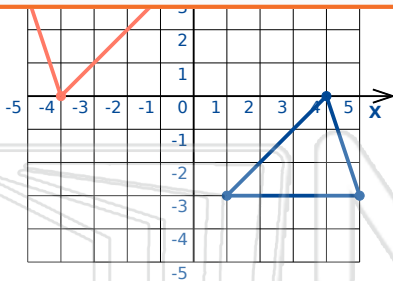


Translation: 2 right and 2 down

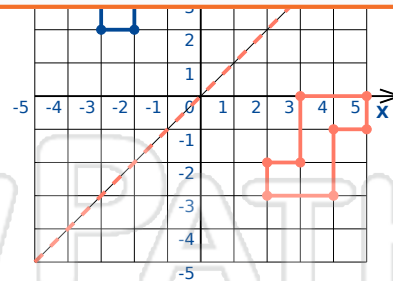


PREVIEW

Please [Sign In](#) or [Sign Up](#) to download the printable version of this worksheet



Rotation: 180° clockwise about the origin



Reflection: Across Line $y = x$