

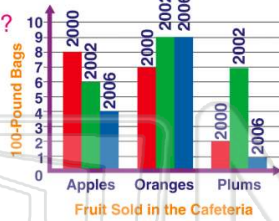


Name _____ Class _____ Date _____

1 2002 was a good year for selling plums.

True or false?

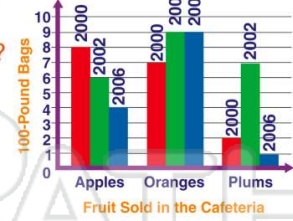
- A true
- B false



2 Oranges are **no longer popular** in the cafeteria.

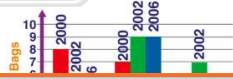
True or false?

- A true
- B false



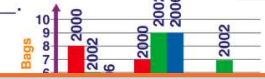
3 The **total** amount of fruit sold in 2002 was _____ the amount sold in 2006.

- A less than
- B equal to



4 If **only one** fruit could be sold in the cafeteria, the **best** one to offer would be _____.

- A apples



5

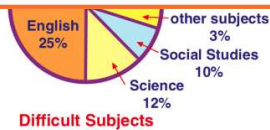


PREVIEW

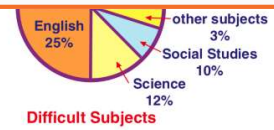
Please [Sign In](#) or [Sign Up](#) to download the printable version of this worksheet

7

- A true
- B false




- A true
- B false



9

The **circle graph** _____.


- A shows which subjects are easy
- B presents a clear picture of the data
- C tells what is studied in math
- D indicates science is fun



10

The smallest section of the graph indicates "**other subjects**" which were found to be difficult. Which **subject** might be included?

- A social studies
- B science
- C computer science
- D English



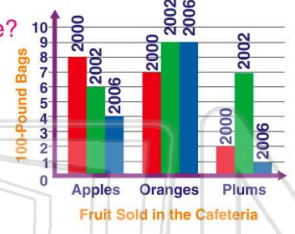


Name _____ Class _____ Date _____

1 2002 was a good year for selling plums.

True or false?

- A true
- B false

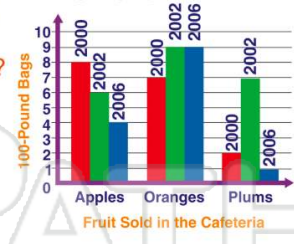


A

2 Oranges are **no longer popular** in the cafeteria.

True or false?

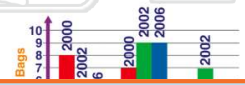
- A true
- B false



B

3 The **total** amount of fruit sold in 2002 was _____ the amount sold in 2006.

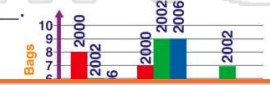
- A less than
- B equal to



C

4 If **only one** fruit could be sold in the cafeteria, the **best** one to offer would be _____.

- A apples



D

5



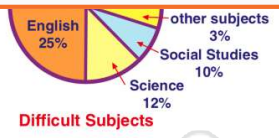
D

PREVIEW

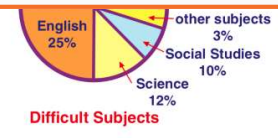
Please [Sign In](#) or [Sign Up](#) to download the printable version of this worksheet

7

- A true
- B false




- A true
- B false



A

9


- The **circle graph** _____.
- A shows which subjects are easy
 - B presents a clear picture of the data
 - C tells what is studied in math
 - D indicates science is fun



B

10

- The smallest section of the graph indicates "other subjects" which were found to be difficult. Which **subject** might be included?
- A social studies
 - B science
 - C computer science
 - D English



C