



Name \_\_\_\_\_ Class \_\_\_\_\_ Date \_\_\_\_\_

1 According to the bar graph shown, in which month did the most snow fall?

A December  
B January  
C February  
D March

Month	Amount in Inches
November	30
December	45
January	70
February	90
March	45

2 In the pictograph shown, one figure of a person equals 2 people. How many people ride a bike for exercise?

A 10  
B 8  
C 4  
D 2

Activity	Number of People
Walk	10
Swim	4
Run	6
Bike	8

3 Using the line graph pictured, in which month were the sales of boats the highest?

A May

Month	Sales (thousands)
May	25
June	28
July	30
August	32
September	35

4 The histogram shows the number of miles 50 people drive in a day. What is the number of miles driven by the most people?

Miles	Number of People
0-10	15
10-20	10
20-30	5

5

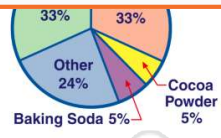


## PREVIEW

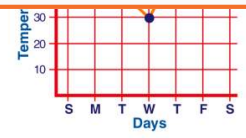
Please [Sign In](#) or [Sign Up](#) to download the printable version of this worksheet

7

B false



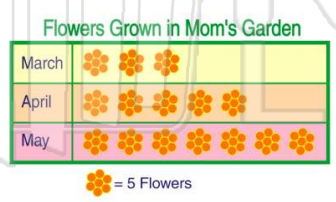
A true  
B false



9

A pictograph uses pictures to help represent the data.

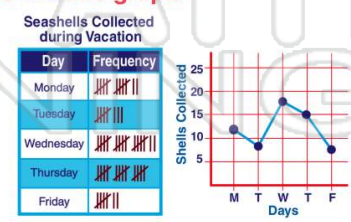
A true  
B false



10

The graph that represents data from this table is a line graph.

A true  
B false





Name \_\_\_\_\_ Class \_\_\_\_\_ Date \_\_\_\_\_

1 According to the bar graph shown, in which month did the most snow fall?

- A December
- B January
- C February
- D March



(C)

2 In the pictograph shown, one figure of a person equals 2 people. How many people ride a bike for exercise?

- A 10
- B 8
- C 4
- D 2



(B)

3 Using the line graph pictured, in which month were the sales of boats the highest?

- A May



(B)

4 The histogram shows the number of miles 50 people drive in a day. What is the number of miles driven by the most people?



(C)

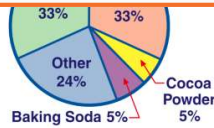


## PREVIEW

Please [Sign In](#) or [Sign Up](#) to download the printable version of this worksheet

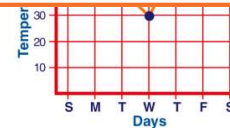
7

- B false



(A)

- A true
- B false



(A)

9 A pictograph uses pictures to help represent the data.

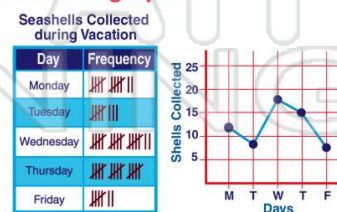
- A true
- B false



(A)

10 The graph that represents data from this table is a line graph.

- A true
- B false



(A)