







Name _____ Class _____ Date _____

1 In this pattern, what number comes **next**?
4, 8, 12, 16, 20,

- A  16
- B  23
- C  24
- D  32

2 How can the following pattern be **described**?

5 15 45 135

- A Multiply by 5
- B Add 15
- C Multiply by 3
- D Add 10, 30, 50, etc.

3 In the pattern, what are the **next two numbers**?
2 3 6 11 18

4 In this number series, the pattern is "each number is one and a half times larger than the previous one."

1, 2, 4, 7, 11, 16




PREVIEW

Please [Sign In](#) or [Sign Up](#) to download the printable version of this worksheet

7

at the last stop?

A 8 C 12
B 9 D 16



- A 6, 9, 12
- B 5, 9, 14
- C 5, 8, 13
- D 7, 14, 21

9 The rule for this pattern is "add the **next consecutive number starting with one.**"
2, 3, 5, 8, 12, 17...

A true
B false

10 A pattern of numbers is described as "each number is produced by adding the **next consecutive even number to the previous number, starting at 2.**" What are the **first four numbers** in the pattern if the pattern starts at 7?

- A 7, 9, 11, 13
- B 7, 9, 13, 19
- C 7, 9, 12, 16
- D 7, 10, 13, 16



Name _____ Class _____ Date _____

1 In this pattern, what number comes **next**?
4, 8, 12, 16, 20,

- A 
- C 
- B 
- D 

(C)

2 How can the following pattern be **described**?

5 15 45 135

- A Multiply by 5
- B Add 15
- C Multiply by 3
- D Add 10, 30, 50, etc.

(C)

3 In the pattern, what are the **next two numbers**?

2 3 6 11 18 ? ?

(D)

4 In this number series, the pattern is "each number is one and a half times larger than the previous one."

1, 2, 4, 7, 11, 16

(B)

5



(D)

PREVIEW

Please [Sign In](#) or [Sign Up](#) to download the printable version of this worksheet

7

at the last stop?

- A 8
- C 12
- B 9
- D 16



- A 6, 9, 12
- B 5, 9, 14
- C 5, 8, 13
- D 7, 14, 21

(C)

9

The rule for this pattern is "add the **next consecutive number starting with one.**"

2, 3, 5, 8, 12, 17...

- A true
- B false

(B)

10

A pattern of numbers is described as "each number is produced by adding the **next consecutive even number to the previous number, starting at 2.**" What are the **first four numbers** in the pattern if the pattern starts at 7?

- A 7, 9, 11, 13
- C 7, 9, 12, 16
- B 7, 9, 13, 19
- D 7, 10, 13, 16

(B)