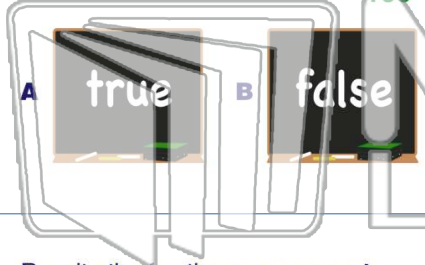





Name \_\_\_\_\_ Class \_\_\_\_\_ Date \_\_\_\_\_

1 Percents can be described as "per hundred," so 15% means .15 or  $\frac{15}{100}$ .



2 Rewrite the fraction as a percent.

$$\frac{45}{100}$$



- A .45
- B .54
- C 45%
- D 54%

3 Rewrite the fraction as a percent.

$$\frac{3}{12}$$



4 Rewrite the decimal as a percent.

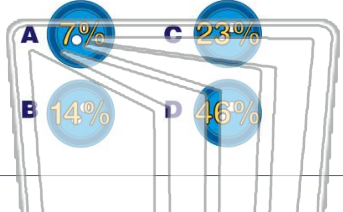
$$0.13$$



## PREVIEW

Please [Sign In](#) or [Sign Up](#) to download the printable version of this worksheet

7 six are red, and four are orange.  
What percent of the buttons are blue?



16% of 45 is ?

- A 2.8
- B 4.5
- C 7.2
- D 8.55



9 At a school with 289 children, 63% of the children own pets. Approximately how many children own pets?

- A 18
- B 104
- C 179
- D 182



10 Calculate the answer.

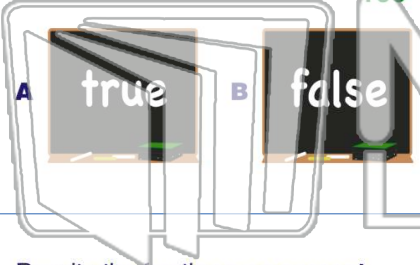
- A 73
- B 75
- C 86
- D 88





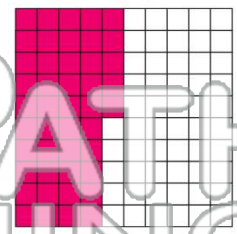
Name \_\_\_\_\_ Class \_\_\_\_\_ Date \_\_\_\_\_

1 Percents can be described as "per hundred," so 15% means .15 or  $\frac{15}{100}$ .



2 Rewrite the fraction as a percent.

$$\frac{45}{100}$$



- A .45
- B .54
- C 45%
- D 54%

3 Rewrite the fraction as a percent.

$$\frac{3}{12}$$



4 Rewrite the decimal as a percent.

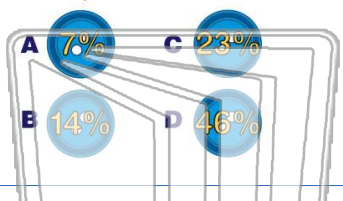
$$0.13$$



## PREVIEW

Please [Sign In](#) or [Sign Up](#) to download the printable version of this worksheet

7 six are red, and four are orange.  
What percent of the buttons are blue?



16% of 45 is ?

- A 2.8
- B 4.5
- C 7.2
- D 8.55



9 At a school with 289 children, 63% of the children own pets. Approximately how many children own pets?

- A 18
- B 104
- C 179
- D 182



10 Calculate the answer.

- A 73
- B 75
- C 86
- D 88

$$146\% \text{ of } 50 =$$