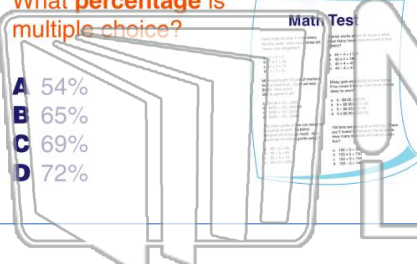




Name _____ Class _____ Date _____

1 There are 80 questions on a test, and 52 are multiple choice. What percentage is multiple choice?



2 Of the 100 children in the sixth grade class, 76 can go on the end-of-the-year field trip. What percentage of the children can go on the trip?



3 Fill in the blank.
3 is % of 20

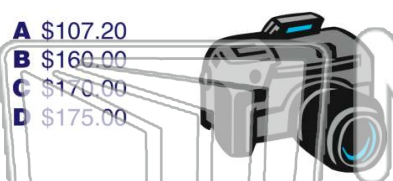
4 Fill in the blank.
150 is % of 375



PREVIEW

Please [Sign In](#) or [Sign Up](#) to download the printable version of this worksheet

7 Original price of the camera is \$175.00. If the camera is sold for \$160.00, what was the original price?



93 is 4% of

- A 2,325
- B 2,640
- C 3,157
- D 4,435

9 Fill in the blank.

- A 283
- B 294
- C 305
- D 320



10 Marie goes to the clothing store. Her purchases equal \$89.25. The sales tax is 8%. How much tax does she pay?

- A \$7.14
- B \$7.86
- C \$71.40
- D \$78.60

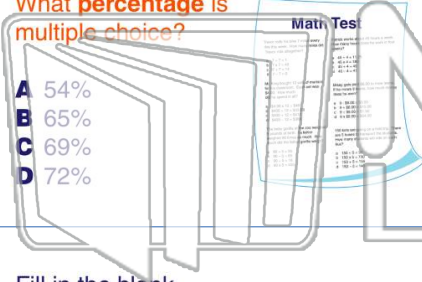




Name _____ Class _____ Date _____

1 There are 80 questions on a test, and 52 are multiple choice. What percentage is multiple choice?

- A 54%
- B 65%
- C 69%
- D 72%



2 Of the 100 children in the sixth grade class, 76 can go on the end-of-the-year field trip. What percentage of the children can go on the trip?

- A 66%
- B 67%
- C 76%
- D 77%



3 Fill in the blank.
3 is % of 20

4 Fill in the blank.
150 is % of 375

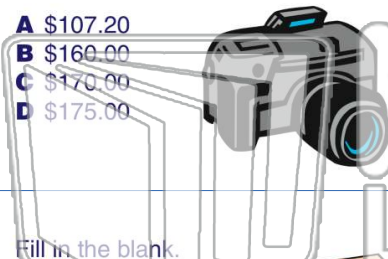


PREVIEW

Please [Sign In](#) or [Sign Up](#) to download the printable version of this worksheet

7 Original price of the camera is \$175.00. If the camera is sold for \$160.00, what was the original price?

- A \$107.20
- B \$160.00
- C \$170.00
- D \$175.00



93 is 4% of

- A 2,325
- B 2,640
- C 3,157
- D 4,435

9 Fill in the blank.

- A 283
- B 294
- C 305
- D 320



10 Marie goes to the clothing store. Her purchases equal \$89.25. The sales tax is 8%. How much tax does she pay?

- A \$7.14
- B \$7.86
- C \$71.40
- D \$78.60

