



Name _____ Class _____ Date _____

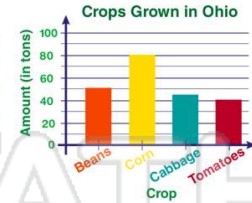
1 According to the **bar graph** shown, in which **state** are there the **most** pools?

- A New York
- B Florida
- C Georgia
- D Pennsylvania



2 According to the **bar graph** shown, how much **more** corn is grown than cabbage?

- A 30 tons more
- B 35 tons more
- C 40 tons more
- D 45 tons more



3 The **bar graph** shown represents the three most popular types of breakfast food liked by a survey of **100** people. **How many** people liked eggs **more** than cereal?

Popular Breakfast Foods

4 According to the **histrogram** shown of Summer Elementary School, what **grade** has the **least** number of children in school?

- A 1st grade

Children / Grade at Summer Elementary School



PREVIEW

Please [Sign In](#) or [Sign Up](#) to download the printable version of this worksheet

7 13, 22, 14, 11.

True or false?

- A true
- B false

10 - 14	
15 - 19	
20 - 24	
25 - 29	

table he made as shown is correct.

True or false?

- A true
- B false

1	
2	
3	
4	
5	

9 According to the **frequency table** shown, which statement is **correct**?

- A The fewest watched 6-8 hrs.
- B Twice as many watched 2-4 hrs than 8-10 hrs.
- C Twice as many watched 4-6 hrs than 0-2 hrs.
- D Half as many watched 6-8 hrs than 2-4 hrs.

Hours	Frequency
0 - 2	
2 - 4	
4 - 6	
6 - 8	
8 - 10	

10 According to the **frequency table** shown, which statement is **correct**?

- A Dress shoes were purchased the most.
- B Twice as many dress shoes were purchased than hiking boots.
- C There are more snow boots than hiking boots.
- D Sandals were purchased the least.

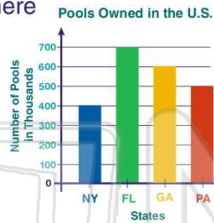
Footwear	Frequency
Sneakers	
Sandals	
Dress Shoes	
Hiking Boots	
Snow Boots	



Name _____ Class _____ Date _____

1 According to the **bar graph** shown, in which **state** are there the **most** pools?

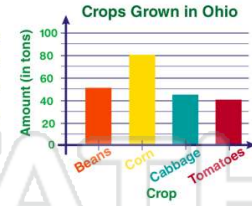
- A New York
- B Florida
- C Georgia
- D Pennsylvania



(B)

2 According to the **bar graph** shown, how much **more** corn is grown than cabbage?

- A 30 tons more
- B 35 tons more
- C 40 tons more
- D 45 tons more



(B)

3 The **bar graph** shown represents the three most popular types of breakfast food liked by a survey of **100** people. **How many** people liked eggs **more** than cereal?

Popular Breakfast Foods

(C)

4 According to the **histogram** shown of Summer Elementary School, what **grade** has the **least** number of children in school?

- A 1st grade



(A)

5



(C)

PREVIEW

Please [Sign In](#) or [Sign Up](#) to download the printable version of this worksheet

7

13, 22, 14, 11.

True or false?

- A true
- B false

10 - 14	
15 - 19	
20 - 24	
25 - 29	

table he made as shown is correct.

True or false?

- A true
- B false

1	
2	
3	
4	
5	

(A)

9

According to the **frequency table** shown, which statement is **correct**?

- A The fewest watched 6-8 hrs.
- B Twice as many watched 2-4 hrs than 8-10 hrs.
- C Twice as many watched 4-6 hrs than 0-2 hrs.
- D Half as many watched 6-8 hrs than 2-4 hrs.

Hours	Frequency
0 - 2	
2 - 4	
4 - 6	
6 - 8	
8 - 10	

(D)

10

According to the **frequency table** shown, which statement is **correct**?

- A Dress shoes were purchased the most.
- B Twice as many dress shoes were purchased than hiking boots.
- C There are more snow boots than hiking boots.
- D Sandals were purchased the least.

Footwear	Frequency
Sneakers	
Sandals	
Dress Shoes	
Hiking Boots	
Snow Boots	

(B)