



Name \_\_\_\_\_ Class \_\_\_\_\_ Date \_\_\_\_\_

1 Solve the **equation** for  $x$ .

$$x + 14 = 33$$

- A 18
- B 19
- C 47
- D 57

2 Solve the **equation** for  $x$ .

$$12 = x + 18$$

- A -6
- B 6
- C 20
- D 30

3 Cierra had **\$69** in her bank account. After she got paid, her balance was **\$143**. How much did she get paid?

4 Solve the **equation** for  $x$ .

$$x - 8 = 41$$



## PREVIEW

Please [Sign In](#) or [Sign Up](#) to download the printable version of this worksheet

7  $6x = 48$

- A 7
- B 8
- C 9
- D 12

$-16x = -64$

- A -4
- B -3
- C 3
- D 4

9 Ben is **twice** the height of his little brother. If Ben is **71** inches tall, how tall is his brother?

$$2x = 71$$

- A 34.5 in.
- B 35 in.
- C 35.5 in.
- D 142 in.

10 Solve the **equation** for  $x$ .

$$\frac{x}{-9} = -6$$

- A -54
- B -48
- C 48
- D 54




Name \_\_\_\_\_ Class \_\_\_\_\_ Date \_\_\_\_\_

1 Solve the **equation** for  $x$ .

$x + 14 = 33$

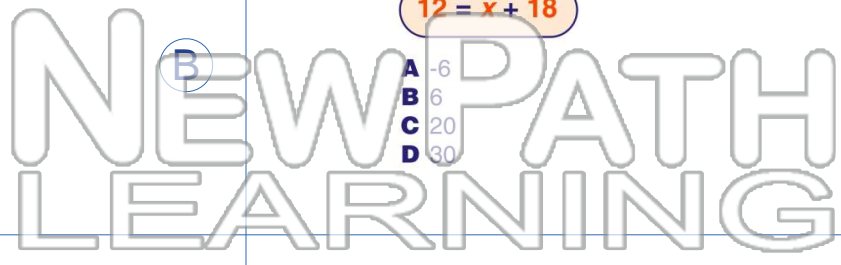
- A 18
- B 19
- C 47
- D 57



2 Solve the **equation** for  $x$ .

$12 = x + 18$

- A -6
- B 6
- C 20
- D 30



3 Cierra had **\$69** in her bank account. After she got paid, her balance was **\$143**. How much did she get paid?

4 Solve the **equation** for  $x$ .

$x - 8 = 41$



5


## PREVIEW

Please [Sign In](#) or [Sign Up](#) to download the printable version of this worksheet

7

$6x = 48$

- A 7
- B 8
- C 9
- D 12



$-16x = -64$

- A -4
- B -3
- C 3
- D 4

9 Ben is **twice** the height of his little brother. If Ben is **71** inches tall, how tall is his brother?

$2x = 71$

- A 34.5 in.
- B 35 in.
- C 35.5 in.
- D 142 in.

10 Solve the **equation** for  $x$ .

$\frac{x}{-9} = -6$

- A -54
- B -48
- C 48
- D 54

