



Name _____ Class _____ Date _____

1 What is the **area** of the rectangle shown?

$A = bh$

- A 48 cm²
- B 78 cm²
- C 96 cm²
- D 104 cm²



2 What is the **area** of the rectangle shown?

$A = bh$

- A 36 in.²
- B 44 in.²
- C 54 in.²
- D 66 in.²



3 If the **area** of the rectangle shown is **84 cm²**, what is the **height** of the rectangle?

$A = bh$



4 If the **area** of the rectangle shown is **70 cm²**, what is the **base** of the rectangle?

$A = bh$

5

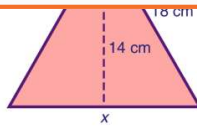


PREVIEW

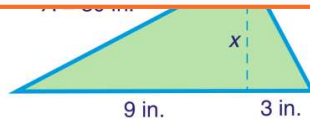
Please [Sign In](#) or [Sign Up](#) to download the printable version of this worksheet

7

- A 7 cm
- B 9 cm
- C 14 cm
- D 18 cm



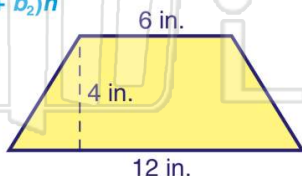
- A 2.5 in.
- B 4 in.
- C 5 in.
- D 6 in.



9 What is the **area** of the trapezoid shown?

$A = \left(\frac{1}{2}\right)(b_1 + b_2)h$

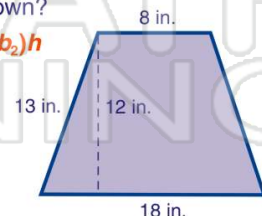
- A 32 in.²
- B 36 in.²
- C 48 in.²
- D 72 in.²



10 What is the **area** of the trapezoid shown?

$A = \left(\frac{1}{2}\right)(b_1 + b_2)h$

- A 156 in.²
- B 169 in.²
- C 312 in.²
- D 338 in.²





Name _____ Class _____ Date _____

1 What is the **area** of the rectangle shown?
 $A = bh$

A 48 cm²
 B 78 cm²
 C 96 cm²
 D 104 cm²

(B)

2 What is the **area** of the rectangle shown?
 $A = bh$

A 36 in.²
 B 44 in.²
 C 54 in.²
 D 66 in.²

(A)

3 If the **area** of the rectangle shown is **84 cm²**, what is the **height** of the rectangle?
 $A = bh$

(C)

4 If the **area** of the rectangle shown is **70 cm²**, what is the **base** of the rectangle?
 $A = bh$

(D)

5

PREVIEW

Please [Sign In](#) or [Sign Up](#) to download the printable version of this worksheet

(C)

7

A 7 cm
 B 9 cm
 C 14 cm
 D 18 cm

(B)

A 2.5 in.
 B 4 in.
 C 5 in.
 D 6 in.

(C)

9 What is the **area** of the trapezoid shown?
 $A = (\frac{1}{2})(b_1 + b_2)h$

A 32 in.²
 B 36 in.²
 C 48 in.²
 D 72 in.²

(B)

10 What is the **area** of the trapezoid shown?
 $A = (\frac{1}{2})(b_1 + b_2)h$

A 156 in.²
 B 169 in.²
 C 312 in.²
 D 338 in.²

(A)