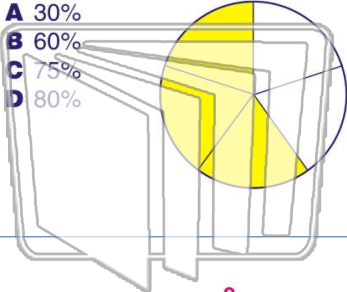




Name \_\_\_\_\_ Class \_\_\_\_\_ Date \_\_\_\_\_

1 What is the fraction  $\frac{3}{5}$  as a percent?

- A 30%
- B 60%
- C 75%
- D 80%



2 What is the fraction  $\frac{5}{8}$  as a percent?

- A 40%
- B 47.5%
- C 62.5%
- D 67.5%



3 What is the fraction  $\frac{2}{3}$  as a percent?

- A 33.3%



4 What is the decimal 0.84 as a percent?

- A 4.8%

5

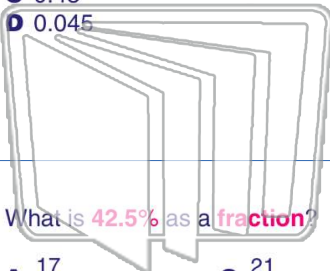


## PREVIEW

Please [Sign In](#) or [Sign Up](#) to download the printable version of this worksheet

7

- A 45.0
- B 4.5
- C 0.45
- D 0.045



- A  $\frac{1}{3}$
- B  $\frac{16}{25}$
- C  $\frac{32}{45}$
- D  $\frac{31}{50}$

9

What is 42.5% as a fraction?

- A  $\frac{17}{40}$
- B  $\frac{18}{40}$
- C  $\frac{21}{50}$
- D  $\frac{22}{50}$

10

What is 30% of 20?

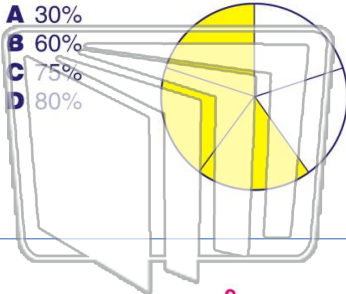
- A 4
- B 5
- C 6
- D 8



Name \_\_\_\_\_ Class \_\_\_\_\_ Date \_\_\_\_\_

1 What is the fraction  $\frac{3}{5}$  as a percent?

- A 30%
- B 60%
- C 75%
- D 80%



2 What is the fraction  $\frac{5}{8}$  as a percent?

- A 40%
- B 47.5%
- C 62.5%
- D 67.5%



3 What is the fraction  $\frac{2}{3}$  as a percent?

- A 33.3%



4 What is the decimal 0.84 as a percent?

- A 4.8%

5

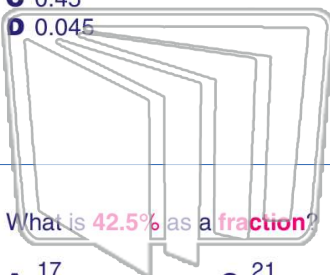


## PREVIEW

Please [Sign In](#) or [Sign Up](#) to download the printable version of this worksheet

7

- A 45.0
- B 4.5
- C 0.45
- D 0.045



- A  $\frac{1}{3}$
- B  $\frac{16}{25}$
- C  $\frac{32}{45}$
- D  $\frac{31}{50}$

9 What is 42.5% as a fraction?

- A  $\frac{17}{40}$
- B  $\frac{18}{40}$
- C  $\frac{21}{50}$
- D  $\frac{22}{50}$

10 What is 30% of 20?

- A 4
- B 5
- C 6
- D 8