




Name _____ Class _____ Date _____

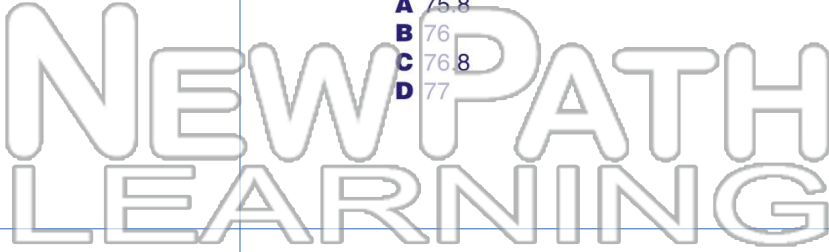
1 What is **15%** of **60**?

- A 6
- B 7
- C 8
- D 9



2 What is **80%** of **95**?

- A 75.8
- B 76
- C 76.8
- D 77



3 **Three hundred seventy** is **20%** of what number?

4 **One hundred thirty-two** is **60%** of what number?

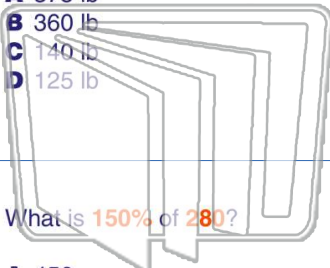


PREVIEW

Please [Sign In](#) or [Sign Up](#) to download the printable version of this worksheet

7 How much does Mrs. Jones weigh?

- A 375 lb
- B 360 lb
- C 140 lb
- D 125 lb



8 Many people were surveyed with his services and found that **85%** thought he did a good job or better. About how many people were **not** satisfied with Scott's work?

- A 4
- B 5
- C 2
- D 21



9 What is **150%** of **280**?

- A 450
- B 420
- C 45
- D 42

10 What is **280%** of **315**?


- A 84.0
- B 88.2
- C 840
- D 882



Name _____ Class _____ Date _____

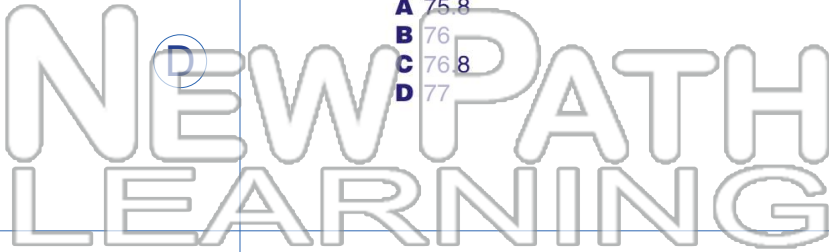
1 What is **15%** of **60**?

- A 6
- B 7
- C 8
- D 9



2 What is **80%** of **95**?

- A 75.8
- B 76
- C 76.8
- D 77



3 **Three hundred seventy** is **20%** of what number?

4 **One hundred thirty-two** is **60%** of what number?

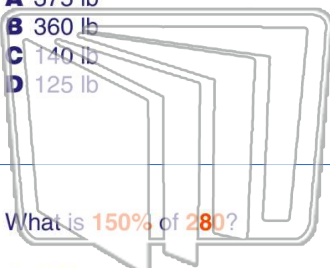


PREVIEW

Please [Sign In](#) or [Sign Up](#) to download the printable version of this worksheet

7 How much does Mrs. Jones weigh?

- A 375 lb
- B 360 lb
- C 140 lb
- D 125 lb



8 Many people were interviewed about Scott's work with his services and found that **85%** thought he did a good job or better. About how many people were **not** satisfied with Scott's work?

- A 4
- B 5
- C 2
- D 21

9 What is **150%** of **280**?

- A 450
- B 420
- C 45
- D 42

10 What is **280%** of **315**?

- A 84.0
- B 88.2
- C 840
- D 882