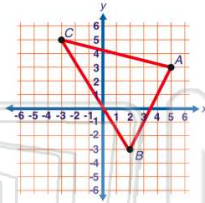




Name \_\_\_\_\_ Class \_\_\_\_\_ Date \_\_\_\_\_

1 According to the figure shown, there are points in all **quadrants** except \_\_\_\_\_.

- A Quadrant I
- B Quadrant II
- C Quadrant III
- D Quadrant IV



2 The notation,  $\overrightarrow{AB}$  with a **one-way arrow** over it refers to the line that has the points  $A$  and  $B$  on it.



- A true
- B false

3 The figure shown can be extended in all directions and is a **plane**.

True or false?



4 The **angle** in the figure shown is \_\_\_\_\_.

- A acute
- B right

5



## PREVIEW

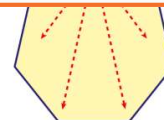
Please [Sign In](#) or [Sign Up](#) to download the printable version of this worksheet

7

D  $360^\circ$



- A 7
- B 5
- C 3
- D 2



9 The formula for finding the **sum of the interior angles** of a polygon with sides,  $n$  is  $(n - 2) \cdot 180$ .

True or false?

- A true
- B false



10 To **measure angles**, a tool called a compass is used.

True or false?

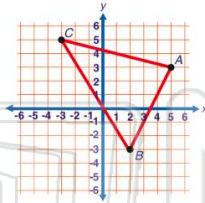
- A true
- B false



Name \_\_\_\_\_ Class \_\_\_\_\_ Date \_\_\_\_\_

1 According to the figure shown, there are points in all **quadrants** except \_\_\_\_\_.

- A Quadrant I
- B Quadrant II
- C Quadrant III
- D Quadrant IV



(C)

2 The notation,  $\overrightarrow{AB}$  with a **one-way arrow** over it refers to the line that has the points  $A$  and  $B$  on it.

True or false?



- A true
- B false

(B)

3 The figure shown can be extended in all directions and is a **plane**.

True or false?



(A)

4 The **angle** in the figure shown is \_\_\_\_\_.

- A acute
- B right



(D)

5



(C)

## PREVIEW

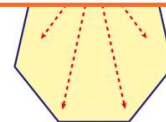
Please [Sign In](#) or [Sign Up](#) to download the printable version of this worksheet

7

D  $360^\circ$



- A 7
- B 5
- C 3
- D 2



(B)

9 The formula for finding the **sum of the interior angles** of a polygon with sides,  $n$  is  $(n - 2) \cdot 180$ .

True or false?

- A true
- B false



(A)

10 To **measure angles**, a tool called a compass is used.

True or false?

- A true
- B false

(B)