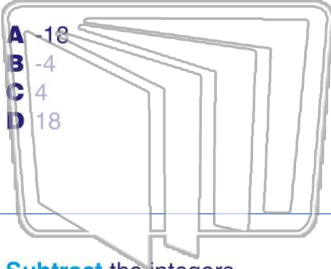




Name _____ Class _____ Date _____

1 **Add** the integers.
 $-7 + 11 = \underline{\hspace{2cm}}$



2 **Add** the integers.
 $12 + (-4) = \underline{\hspace{2cm}}$

- A 16
- B 8
- C -8
- D -16

NEWPATH LEARNING

3 **Subtract** the integers.
 $-4 - 3 = \underline{\hspace{2cm}}$

4 **Subtract** the integers.
 $2 - (-9) = \underline{\hspace{2cm}}$

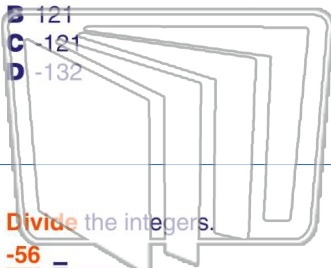


PREVIEW

Please [Sign In](#) or [Sign Up](#) to download the printable version of this worksheet

7 $(11)(-12) = \underline{\hspace{2cm}}$

- A 132
- B 121
- C -121
- D -132



$(-3)(3)(-5) = \underline{\hspace{2cm}}$

- A 45
- B 30
- C -30
- D -45

NEWPATH LEARNING

9 **Divide** the integers.
 $\frac{-56}{-7} = \underline{\hspace{2cm}}$

- A -9
- B -8
- C 8
- D 9

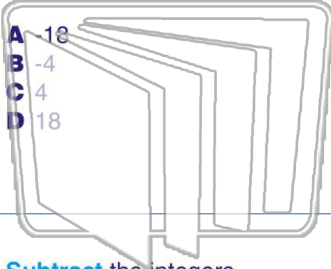
10 **Divide** the integers.
 $\frac{255}{-5} = \underline{\hspace{2cm}}$

- A 51
- B 25
- C -25
- D -51



Name _____ Class _____ Date _____

1 **Add** the integers.
 $-7 + 11 = \underline{\hspace{2cm}}$



- A -18
- B -4
- C 4
- D 18

2 **Add** the integers.
 $12 + (-4) = \underline{\hspace{2cm}}$

- A 16
- B 8
- C -8
- D -16

NEWPATH
LEARNING

3 **Subtract** the integers.
 $-4 - 3 = \underline{\hspace{2cm}}$

4 **Subtract** the integers.
 $2 - (-9) = \underline{\hspace{2cm}}$



PREVIEW

Please [Sign In](#) or [Sign Up](#) to download the printable version of this worksheet

7 $(11)(-12) = \underline{\hspace{2cm}}$

- A 132
- B 121
- C -121
- D -132

$(-3)(3)(-5) = \underline{\hspace{2cm}}$

- A 45
- B 30
- C -30
- D -45

9 **Divide** the integers.
 $\frac{-56}{-7} = \underline{\hspace{2cm}}$

- A -9
- B -8
- C 8
- D 9

10 **Divide** the integers.
 $\frac{255}{-5} = \underline{\hspace{2cm}}$

- A 51
- B 25
- C -25
- D -51

NEWPATH
LEARNING