




Name \_\_\_\_\_ Class \_\_\_\_\_ Date \_\_\_\_\_

1 In order to be **similar**, two figures must have the same **size and shape**.

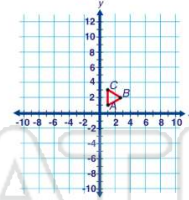
True or false?

- A true
- B false



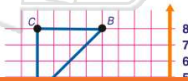
2 What are the coordinates of **B** when the figure shown is **dilated by a scale factor of 4**?

- A (4, 4)
- B (4, 12)
- C (8, 12)
- D (12, 8)

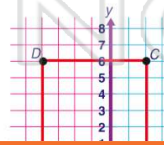


3 What **scale factor** is used to dilate triangle **ABC** to triangle **A'B'C'**?

- A .25
- B .5



4 The figure shown is dilated by a **scale factor of .5**. What is the coordinate of **D**?

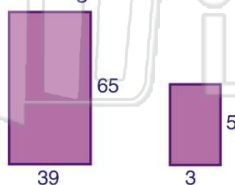


## PREVIEW

Please [Sign In](#) or [Sign Up](#) to download the printable version of this worksheet

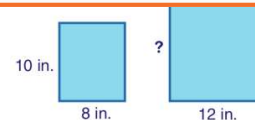
9 For the rectangles shown, what is the **ratio** of the larger rectangle's area to the smaller rectangle's area?

- A  $\frac{39}{5}$
- B  $\frac{3}{39}$
- C 13
- D 169



10 An architect has blueprints for a house. The scale is  $\frac{1}{2}$  in. = 2.5 ft. If the blueprint measures the length of the house to be **12 in.**, what is the **actual length** of the house?

- A 2.4 ft
- B 30 ft
- C 60 ft
- D 120 ft






Name \_\_\_\_\_ Class \_\_\_\_\_ Date \_\_\_\_\_

1 In order to be **similar**, two figures must have the same **size and shape**.

True or false?

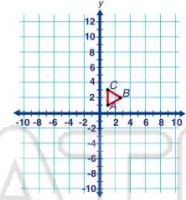
- A true
- B false



(B)

2 What are the coordinates of **B** when the figure shown is **dilated by a scale factor of 4**?

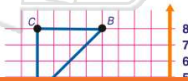
- A (4, 4)
- B (4, 12)
- C (8, 12)
- D (12, 8)



(D)

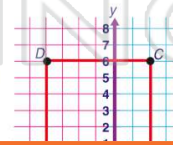
3 What **scale factor** is used to dilate triangle **ABC** to triangle **A'B'C'**?

- A .25
- B .5



(A)

4 The figure shown is dilated by a **scale factor of .5**. What is the coordinate of **D**?



(C)



5

(B)

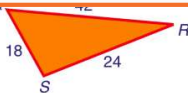
## PREVIEW

Please [Sign In](#) or [Sign Up](#) to download the printable version of this worksheet

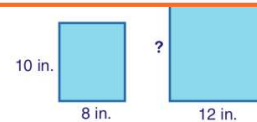
7

(D)

- C 10.5 cm
- D 18.7 cm

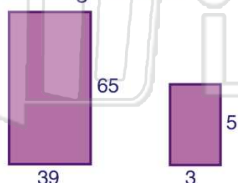


- A 15 in.
- B 27 in.
- C 36 in.
- D 54 in.



9 For the rectangles shown, what is the **ratio** of the larger rectangle's area to the smaller rectangle's area?

- A  $\frac{39}{5}$
- B  $\frac{3}{39}$
- C 13
- D 169



(D)

10 An architect has blueprints for a house. The scale is  $\frac{1}{2}$  in. = 2.5 ft. If the blueprint measures the length of the house to be **12 in.**, what is the **actual length** of the house?

- A 2.4 ft
- B 30 ft
- C 60 ft
- D 120 ft

(C)