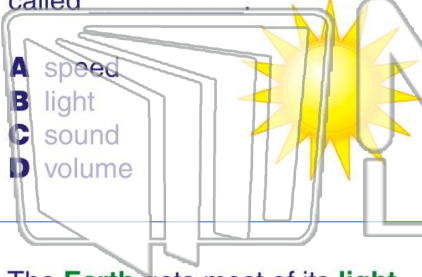




Name _____ Class _____ Date _____

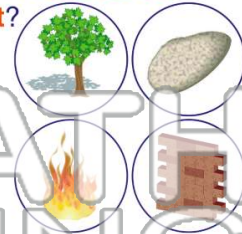
1 The **brightness** that comes from some objects, like the Sun, is called

- A speed
- B light
- C sound
- D volume



2 Which object is a **source of light and heat**?

- A a tree
- B a rock
- C a fire
- D a wall



3 The **Earth** gets most of its **light** from _____.

4 How does **light** travel?

- A to the left



5




PREVIEW

Please [Sign In](#) or [Sign Up](#) to download the printable version of this worksheet

7



- A a flashlight
- B a candle
- C the Sun
- D a lamp



- A a lamp
- B the Sun
- C car headlights
- D a match

9 Which **time of day** would you need to **turn on a light** inside your house so you could see?

- A 10:00 a.m.
- B 1:00 p.m.
- C 3:00 p.m.
- D 11:00 p.m.



10 Plants get **energy** from the Sun.

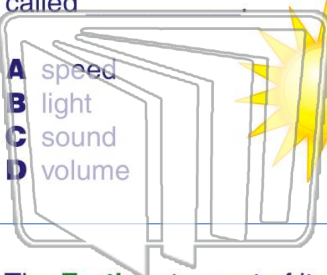
- A yes
- B no





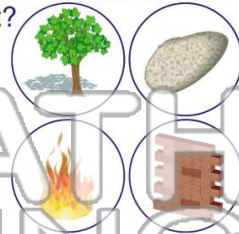
Name _____ Class _____ Date _____

1 The **brightness** that comes from some objects, like the Sun, is called



- A speed
- B light
- C sound
- D volume

2 Which object is a **source of light and heat**?



- A a tree
- B a rock
- C a fire
- D a wall

3 The **Earth** gets most of its **light** from _____.

4 How does **light** travel?

- A to the left

5




PREVIEW

Please [Sign In](#) or [Sign Up](#) to download the printable version of this worksheet

7



- A a flashlight
- B a candle
- C the Sun
- D a lamp



- A a lamp
- B the Sun
- C car headlights
- D a match

9 Which **time of day** would you need to **turn on a light** inside your house so you could see?

- A 10:00 a.m.
- B 1:00 p.m.
- C 3:00 p.m.
- D 11:00 p.m.



10 Plants get **energy** from the Sun.

- A yes
- B no

