



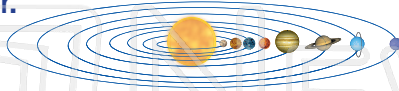
The Sky

Sci
A

Name _____ Class _____ Date _____

1 Where is the **Sun** in the **solar system**?

Check the answer.



- a. on the right side
- b. on the left side
- c. in the center

6 A _____ helps us see stars and planets. It is a tool that makes things that are far away look close.

- telescope microscope
- hand lens flashlight



7 What might you see in the sky **at night**?

- a. the Sun

2 The **Sun** is _____ the **Earth**.

- a. to
- b. b
- c. s



PREVIEW

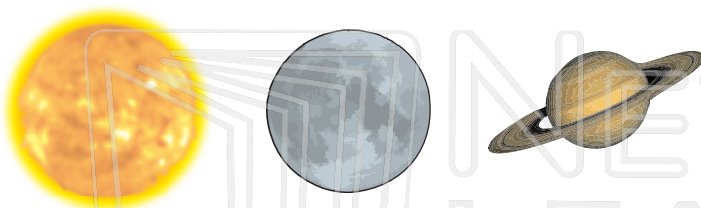
Please [Sign In](#) or [Sign Up](#) to download the printable version of this worksheet



3 A _____ that **mov**
Sun in a
Circle the

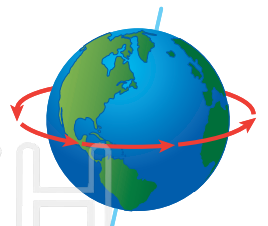
moon

4 What **moves around the Earth**? Circle it.



9 How many times does **Earth spin around** each day?

1 2 3




5 Do you see the **same amount** of the Moon **every night**?

yes no



10 A _____ is a **hot ball of gas**.

- planet star
- moon comet





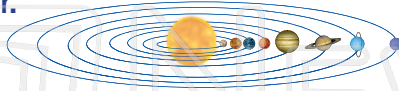
The Sky - Answer Key

Sci
A

Name _____ Class _____ Date _____

1 Where is the **Sun** in the **solar system**?

Check the answer.



- a. on the right side
- b. on the left side
- c. in the center

6 A _____ helps us see stars and planets. It is a tool that makes things that are far away look close.

- telescope** microscope
- hand lens flashlight



7 What might you see in the sky **at night**?

- a. the Sun

2 The **Sun** is _____ the **Earth**.

- a. to
- b. b
- c. s



PREVIEW

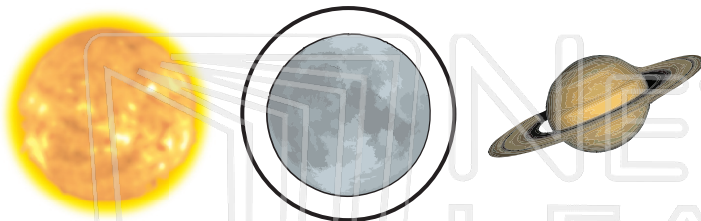
Please [Sign In](#) or [Sign Up](#) to download the printable version of this worksheet



3 A _____ that **mov**
Sun in a
Circle the

moon

4 What **moves around the Earth**? Circle it.

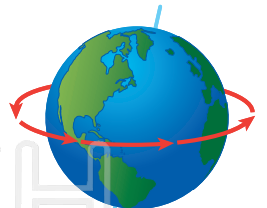


9 How many times does **Earth spin around** each day?

1

2

3



5 Do you see the **same amount** of the Moon **every night**?

yes

no



10 A _____ is a **hot ball of gas**.

planet

star

moon

comet

