



Name _____ Class _____ Date _____

1 You see **snow** outside. The thermometer says it is **0° Celsius** or **32° Fahrenheit**. What would be best to do outside?

- A go to the beach
- B go swimming
- C plant flowers
- D go sledding



2 You see the **Sun** is shining. The thermometer says it is **30° Celsius** or **86° Fahrenheit**. What could you do outside?

- A make snowballs
- B go swimming
- C build a snowman
- D go sledding



3 The _____ **blows** north, south, east, or west.

4 What does a **rain gauge** measure?

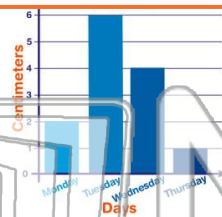


PREVIEW

Please [Sign In](#) or [Sign Up](#) to download the printable version of this worksheet

7 _____ is **water** that is _____ in the air.

- A Monday
- B Tuesday
- C Wednesday
- D Thursday

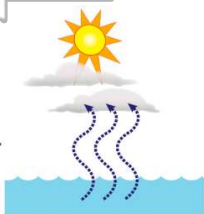


- A Wind
- B Sunshine
- C A rock
- D A cloud



9 _____ is **water** that is _____ in the air.

- A Thunder
- B Wind
- C Water vapor
- D Lightning



10 What forms in the sky when **water vapor cools**?

- A wind
- B clouds
- C sunshine
- D a rainbow



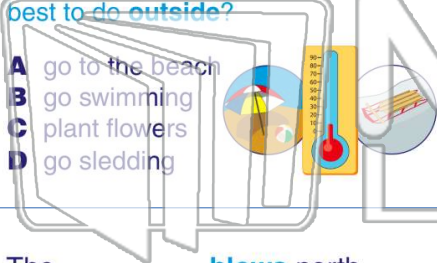


Name _____ Class _____ Date _____

1

You see **snow** outside. The thermometer says it is **0° Celsius** or **32° Fahrenheit**. What would be best to do outside?

- A go to the beach
- B go swimming
- C plant flowers
- D go sledding



2

You see the **Sun** is shining. The thermometer says it is **30° Celsius** or **86° Fahrenheit**. What could you do outside?

- A make snowballs
- B go swimming
- C build a snowman
- D go sledding



3

The _____ **blows** north, south, east, or west.



4

What does a **rain gauge** measure?



5

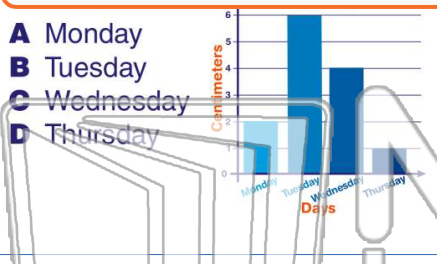


PREVIEW

Please [Sign In](#) or [Sign Up](#) to download the printable version of this worksheet

7

- A Monday
- B Tuesday
- C Wednesday
- D Thursday



_____ tiny drops of water.

- A Wind
- B Sunshine
- C A rock
- D A cloud



9

_____ is **water** that is in the air.

- A Thunder
- B Wind
- C Water vapor
- D Lightning



10

What forms in the sky when **water vapor cools**?

- A wind
- B clouds
- C sunshine
- D a rainbow

