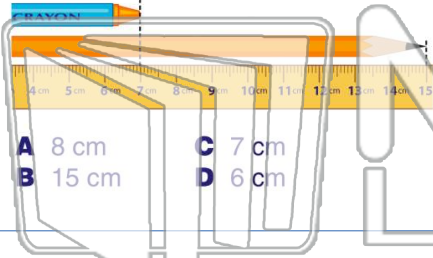




Name \_\_\_\_\_ Class \_\_\_\_\_ Date \_\_\_\_\_

1 How many **more centimeters** long is the pencil than the crayon?



- A 8 cm
- B 15 cm
- C 7 cm
- D 6 cm

2 Mary needs to sort these coins into groups. **How much money** does Mary have in coins?



- A 95¢
- B \$1.15
- C \$1.00
- D \$1.05

3 Mark is making a **mixture of fruit** to create a fruit salad. **How many grams of fruit** did he combine in all?

4 If you rode your bike for an **average of 5 km every hour**, how many km would you ride in **6 hours**?




## PREVIEW

Please [Sign In](#) or [Sign Up](#) to download the printable version of this worksheet

7 **60 decibels** of sound:

	Decibels of Sound	
A telephone	Telephone	60
B large truck	Large truck	90
C train horn	Train horn	100
D rock concert	Rock concert	150

8 **12 hours** of daylight:



- A winter
- B spring
- C summer
- D fall

9 How many **kilometers** is **Earth** from the Sun?

	Distance from the Sun	
A 150 million kilometers	Mercury	58 million km
B 228 million kilometers	Venus	108 million km
C 58 million kilometers	Earth	150 million km
D 108 million kilometers	Mars	228 million km

10 If one day on Earth is equal to **24 hours**, how many **hours** does **3 days** on Earth equal?

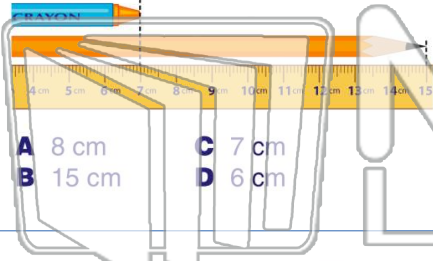
- A 36 hours
- B 12 hours
- C 48 hours
- D 72 hours





Name \_\_\_\_\_ Class \_\_\_\_\_ Date \_\_\_\_\_

1 How many **more** centimeters long is the pencil than the crayon?



- A 8 cm
- B 15 cm
- C 7 cm
- D 6 cm

2 Mary needs to sort these coins into groups. **How much money** does Mary have in coins?



- A 95¢
- B \$1.15
- C \$1.00
- D \$1.05

3 Mark is making a **mixture** of fruit to create a fruit salad. **How many grams of fruit** did he combine in all?

4 If you rode your bike for an **average** of 5 km every hour, how many km would you ride in 6 hours?

## PREVIEW

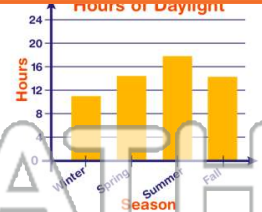
Please [Sign In](#) or [Sign Up](#) to download the printable version of this worksheet

7 **60 decibels** of sound:

Decibels of Sound		
Telephone		60
Large truck		90
Train horn		100
Rock concert		150

- A telephone
- B large truck
- C train horn
- D rock concert

8 **12 hours** of daylight:



- A winter
- B spring
- C summer
- D fall

9 How many **kilometers** is Earth from the Sun?

Distance from the Sun	
Mercury	58 million km
Venus	108 million km
Earth	150 million km
Mars	228 million km

- A 150 million kilometers
- B 228 million kilometers
- C 58 million kilometers
- D 108 million kilometers

10 If one day on Earth is equal to 24 hours, how many **hours** does 3 days on Earth equal?

- A 36 hours
- B 12 hours
- C 48 hours
- D 72 hours

