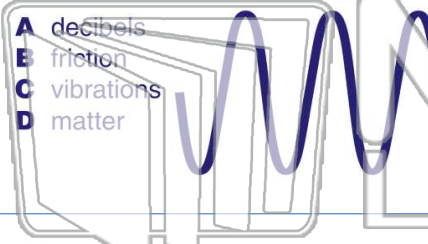




Name _____ Class _____ Date _____

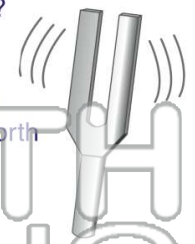
1 **Sound** is **energy** that travels in a wave and is caused by _____.

- A decibels
- B friction
- C vibrations
- D matter



2 What are **vibrations**?

- A beats on a drum
- B movements made rapidly back and forth
- C slow movements
- D sound waves



3 **Vibrations** travel through the air and into your ear. You hear sounds when vibrating air causes your _____

4 How does your **outer ear** help you hear?

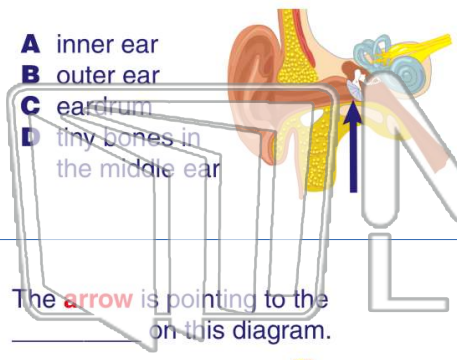


PREVIEW

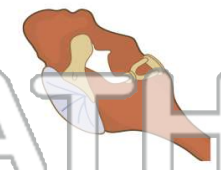
Please [Sign In](#) or [Sign Up](#) to download the printable version of this worksheet

7 **earrums**, in our _____, which vibrate when our eardrum vibrates.

- A inner ear
- B outer ear
- C eardrum
- D tiny bones in the middle ear

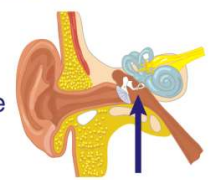


- A middle ear
- B outer ear
- C inner ear
- D earlobe



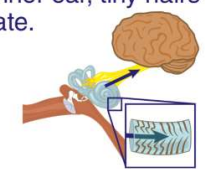
9 The **arrow** is pointing to the _____ on this diagram.

- A inner ear
- B outer ear
- C little bones in the middle ear
- D ear canal



10 Our **inner ear** is just beyond the little bones in our ear. Part of the **inner ear** is filled with _____. When the vibrations reach the inner ear, tiny hairs inside this liquid vibrate.

- A oxygen
- B hot wax
- C liquid
- D carbon dioxide

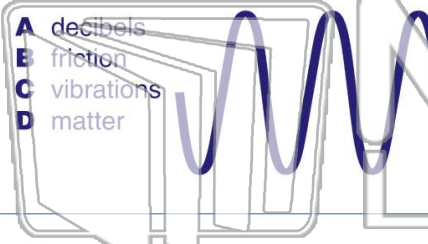




Name _____ Class _____ Date _____

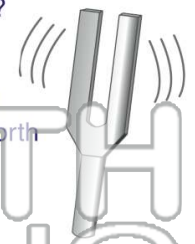
1 **Sound** is **energy** that travels in a wave and is caused by _____.

- A decibels
- B friction
- C vibrations
- D matter



2 What are **vibrations**?

- A beats on a drum
- B movements made rapidly back and forth
- C slow movements
- D sound waves



3 **Vibrations** travel through the air and into your ear. You hear sounds when vibrating air causes your _____

4 How does your **outer ear** help you hear?



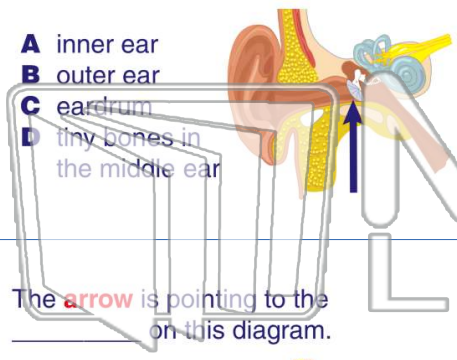
PREVIEW

Please [Sign In](#) or [Sign Up](#) to download the printable version of this worksheet

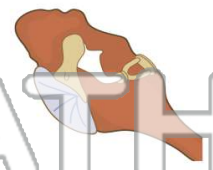
7 _____

_____ **earrums**, in our _____, which vibrate when our eardrum vibrates.

- A inner ear
- B outer ear
- C eardrum
- D tiny bones in the middle ear

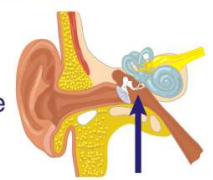


- A middle ear
- B outer ear
- C inner ear
- D earlobe



9 The **arrow** is pointing to the _____ on this diagram.

- A inner ear
- B outer ear
- C little bones in the middle ear
- D ear canal



10 Our **inner ear** is just beyond the little bones in our ear. Part of the **inner ear** is filled with _____. When the vibrations reach the inner ear, tiny hairs inside this liquid vibrate.

- A oxygen
- B hot wax
- C liquid
- D carbon dioxide

