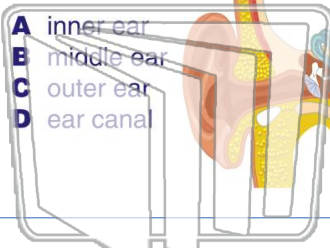




Name _____ Class _____ Date _____

1 The **arrow** on the diagram is pointing to the _____.



2 The vibrations of tiny hairs inside the liquid of our **inner ear** send signals to our _____, which recognizes the sound we are hearing.

- A liver
- B blood
- C brain
- D heart



3 What do the **vibrations** caused by sound waves cause us to do?

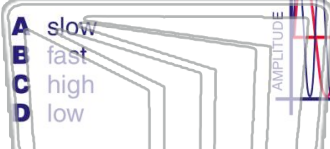
4 You make **sounds** when you talk because your _____ vibrate when air passes through them.



PREVIEW

Please [Sign In](#) or [Sign Up](#) to download the printable version of this worksheet

7 _____ are created by _____ moving vibrations, low sounds are created by slower moving vibrations.



shorter the length of the string _____.

- A the lower the sound it creates
- B the higher the sound it creates
- C the louder the sound it creates
- D the quieter the sound it creates

9 On a stringed instrument, the **longer** the length of the string _____.

- A the quieter the sound it creates
 - B the louder the sound it creates
 - C the higher the sound it creates
 - D the lower the sound it creates
-

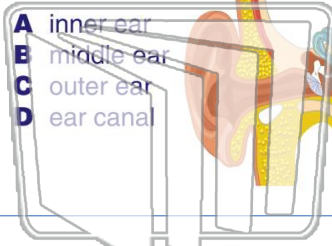
10 The **pitch** of a sound depends on the frequency of the vibrations. What does the **sound frequency** refer to?

- A the number of vibrations in a certain time frame
- B how loud a sound is
- C how quiet a sound is
- D where the sound is coming from



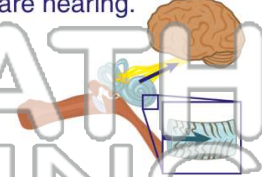
Name _____ Class _____ Date _____

1 The **arrow** on the diagram is pointing to the _____.



2 The vibrations of tiny hairs inside the liquid of our **inner ear** send signals to our _____, which recognizes the sound we are hearing.

- A liver
- B blood
- C brain
- D heart



3 What do the **vibrations** caused by sound waves cause us to do?

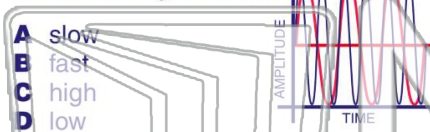
4 You make **sounds** when you talk because your _____ vibrate when air passes through them.



PREVIEW

Please [Sign In](#) or [Sign Up](#) to download the printable version of this worksheet

7 _____ are created by _____ moving vibrations, low sounds are created by slower moving vibrations.



shorter the length of the string

- A the lower the sound it creates
- B the higher the sound it creates
- C the louder the sound it creates
- D the quieter the sound it creates

9 On a stringed instrument, the **longer** the length of the string _____.

- A the quieter the sound it creates
- B the louder the sound it creates
- C the higher the sound it creates
- D the lower the sound it creates



10 The **pitch** of a sound depends on the frequency of the vibrations. What does the **sound frequency** refer to?

- A the number of vibrations in a certain time frame
- B how loud a sound is
- C how quiet a sound is
- D where the sound is coming from