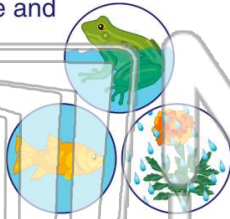




Name _____ Class _____ Date _____

1 _____ living things need **water** to survive and to grow.

- A All
- B Several
- C Few
- D Many



2 **Plants** need water _____.

- A because rain falls from the sky
- B to make their own food
- C because water vapor forms clouds
- D because water is found in the ground



3 _____ of a human body is made up of **water**.

- A Very little



4 Water is used in the human body in many ways. **Which of these is not a way water helps the human body?**

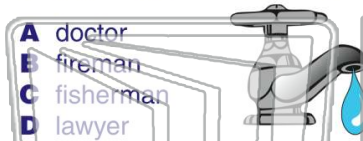


PREVIEW

Please [Sign In](#) or [Sign Up](#) to download the printable version of this worksheet

7 _____ **need water** to do his or her job and provide service to the community?

- A doctor
- B fireman
- C fisherman
- D lawyer



8 _____ **what would happen to their crops?**

- A The crops would grow larger.
- B The crops would die.
- C New plants would grow.
- D The crops would grow even taller.

9 All living things need water in order to survive. **What must people do in order to survive?**

- A drink water
- B swim
- C wash their car
- D play in a sprinkler



10 Water is used by **industries** to make a variety of products such as _____ and steel.

- A sand
- B flags
- C paper
- D shoes

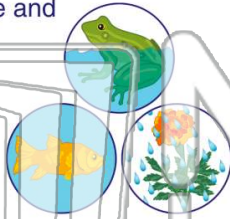




Name _____ Class _____ Date _____

1 _____ living things need **water** to survive and to grow.

- A All
- B Several
- C Few
- D Many



2 **Plants** need water _____.

- A because rain falls from the sky
- B to make their own food
- C because water vapor forms clouds
- D because water is found in the ground



3 _____ of a human body is made up of **water**.

- A Very little



4 Water is used in the human body in many ways. **Which of these is not a way water helps the human body?**

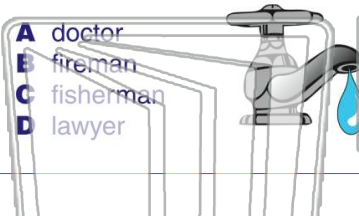


PREVIEW

Please [Sign In](#) or [Sign Up](#) to download the printable version of this worksheet

7 _____ **need water** to do his or her job and provide service to the community?

- A doctor
- B fireman
- C fisherman
- D lawyer



8 _____ **what would happen to their crops?**

- A The crops would grow larger.
- B The crops would die.
- C New plants would grow.
- D The crops would grow even taller.

9 All living things need water in order to survive. **What must people do in order to survive?**

- A drink water
- B swim
- C wash their car
- D play in a sprinkler



10 Water is used by **industries** to make a variety of products such as _____ and steel.

- A sand
- B flags
- C paper
- D shoes

