

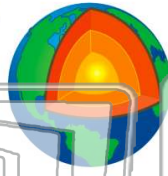


Name \_\_\_\_\_ Class \_\_\_\_\_ Date \_\_\_\_\_

1

Earth is made up of **three** main layers:

- A crust, mantle, and core
- B crust, mantle, and sediment
- C mantle, core, and lava
- D crust, core, and magma



2

What is the **innermost layer** of the earth?

- A magma
- B core
- C mantle
- D crust



3

The \_\_\_\_\_ is packed tightly so it is mostly **solid**.



4

What is the **outer core** of the earth made up of?



5



## PREVIEW

Please [Sign In](#) or [Sign Up](#) to download the printable version of this worksheet

7

the **earth's surface** is called \_\_\_\_\_. It is made up of several different layers: topsoil, subsoil, and bedrock.

- A loam
- B soil
- C humans
- D mulch



\_\_\_\_\_ of soil in an area helps determine \_\_\_\_\_.

- A the weather in that area
- B the type of plants that grow in that area
- C the temperature in that area
- D how cold it gets in that area



9

What does **all soil** contain?

- A air and water only
- B humus and air only
- C pieces of weathered rock, humus, air, and water
- D loam



10

Soil is **extremely important**. Which sentence supports this fact?

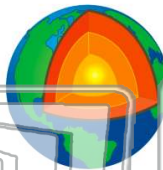
- A Animals need soil.
- B Soil keeps plants warm.
- C Soil can be broken down.
- D Soil supports all life on earth.






Name \_\_\_\_\_ Class \_\_\_\_\_ Date \_\_\_\_\_

1 **Earth** is made up of **three** main layers:




**A** crust, mantle, and core  
**B** crust, mantle, and sediment  
**C** mantle, core, and lava  
**D** crust, core, and magma

2 What is the **innermost layer** of the earth?




**A** magma  
**B** core  
**C** mantle  
**D** crust

3 The \_\_\_\_\_ is packed tightly so it is mostly **solid**.



4 What is the **outer core** of the earth made up of?




5



**PREVIEW**


Please [Sign In](#) or [Sign Up](#) to download the printable version of this worksheet

7 the **earth's surface** is called \_\_\_\_\_. It is made up of several different layers: topsoil, subsoil, and bedrock.




**A** loam      **C** humans  
**B** soil      **D** mulch

\_\_\_\_\_ of soil in an area helps determine \_\_\_\_\_.




**A** the weather in that area  
**B** the type of plants that grow in that area  
**C** the temperature in that area  
**D** how cold it gets in that area

9 What does **all soil** contain?



**A** air and water only  
**B** humus and air only  
**C** pieces of weathered rock, humus, air, and water  
**D** loam

10 Soil is **extremely important**. Which sentence supports this fact?



**A** Animals need soil.  
**B** Soil keeps plants warm.  
**C** Soil can be broken down.  
**D** Soil supports all life on earth.