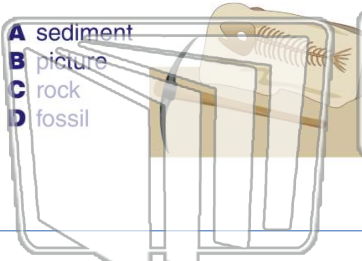




Name _____ Class _____ Date _____

1 A _____ is **remains** or **evidence** of a once-living organism from **long ago**.

- A sediment
- B picture
- C rock
- D fossil



2 What kind of **rock** do **fossils** form in?

- A sedimentary rock
- B sand
- C igneous rock
- D granite



3 There are **several steps** an organism takes when **becoming a fossil**. The **first step** to becoming a fossil

4 **After dying**, which of the following would be the next step of this fish **becoming** a fossil?

- A body changes

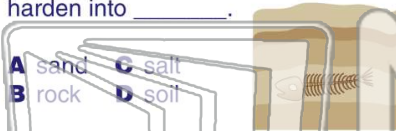


PREVIEW

Please [Sign In](#) or [Sign Up](#) to download the printable version of this worksheet

7 remains may be **replaced with minerals** in the sediment and harden into _____.

- A sand
- B rock
- C salt
- D soil



8 **rock layers weather and erode away**, causing the fossil to become **exposed**.

- A appearing above ground
- B becoming buried again
- C sinking deeper in the rock layers
- D melting under the earth's surface



9 A **space in a rock** which is in the **shape of an animal** that once lived on earth is a fossil called a(n) _____.

- A cast
- B amber
- C mold
- D bone fragment



10 What **type of fossil** is made when the mold of an animal in rock is **filled** in with other rock material?

- A amber fossil
- B a mold
- C a cast
- D an imprint

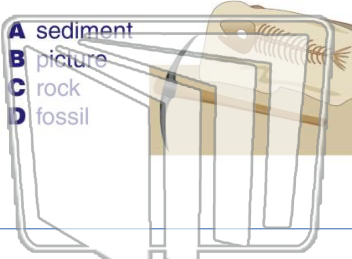




Name _____ Class _____ Date _____

1 A _____ is **remains** or **evidence** of a once-living organism from **long ago**.

- A sediment
- B picture
- C rock
- D fossil



2 What kind of **rock** do **fossils form** in?

- A sedimentary rock
- B sand
- C igneous rock
- D granite



3 There are **several steps** an organism takes when **becoming a fossil**. The **first step** to becoming a fossil

4 **After dying**, which of the following would be the next step of this fish **becoming** a fossil?

- A body changes

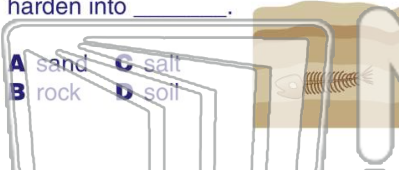


PREVIEW

Please [Sign In](#) or [Sign Up](#) to download the printable version of this worksheet

7 remains may be **replaced with minerals** in the sediment and harden into _____.

- A sand
- B rock
- C salt
- D soil



8 rock layers **weather and erode away**, causing the fossil to become **exposed**.

- A appearing above ground
- B becoming buried again
- C sinking deeper in the rock layers
- D melting under the earth's surface



9 A **space in a rock** which is in the **shape of an animal** that once lived on earth is a fossil called a(n) _____.

- A cast
- B amber
- C mold
- D bone fragment



10 What **type of fossil** is made when the mold of an animal in rock is **filled** in with other rock material?

- A amber fossil
- B a mold
- C a cast
- D an imprint

