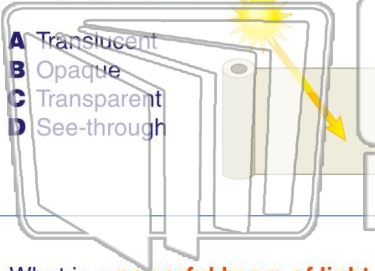





Name _____ Class _____ Date _____

1 _____ material, such as wax paper, allows light to pass through, but it's **not clear**.



- A Translucent
- B Opaque
- C Transparent
- D See-through

2 Materials that **do not allow any light to pass through at all**, such as brick, are _____.



- A translucent
- B opaque
- C transparent
- D clear

3 What is a **powerful beam of light** that creates a lot of **heat**?

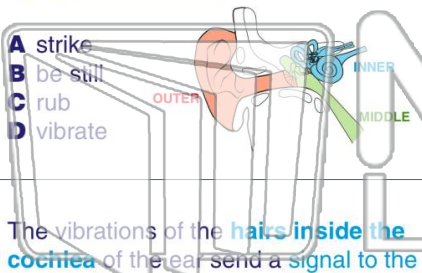
4 _____ are **extremely thin fibers**, made out of glass or plastic, which are bundled together in a flexible tube and



PREVIEW

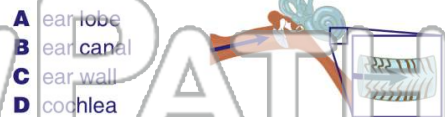
Please [Sign In](#) or [Sign Up](#) to download the printable version of this worksheet

7 _____ our ear drum, and causes our ear drum and then three tiny bones in our ear to _____.



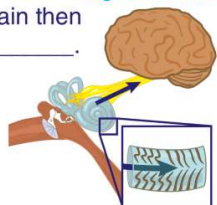
- A strike
- B be still
- C rub
- D vibrate

8 _____ of the **inner ear**, which is filled with liquid that begins to vibrate causing tiny hairs within it to vibrate as well.



- A ear lobe
- B ear canal
- C ear wall
- D cochlea

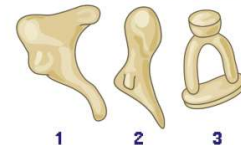
9 The vibrations of the **hairs inside the cochlea** of the ear send a signal to the **brain**, which the brain then interprets as _____.



- A sound
- B light
- C heat
- D smell

10 This is a picture of the **three tiny bones** located in your middle ear: the **hammer, stirrup, and anvil**. They get their names because of how they look. **Which bone is labeled #2?**

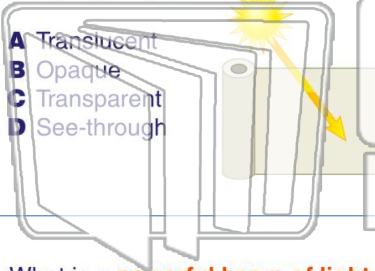
- A hammer
- B stirrup
- C anvil
- D bucket





Name _____ Class _____ Date _____

1 _____ material, such as wax paper, allows light to pass through, but it's **not clear**.



- A Translucent
- B Opaque
- C Transparent
- D See-through

2 Materials that **do not allow any light to pass through at all**, such as brick, are _____.



- A translucent
- B opaque
- C transparent
- D clear

3 What is a **powerful beam of light** that creates a lot of **heat**?

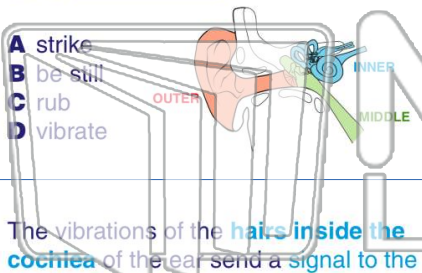
4 _____ are **extremely thin fibers**, made out of glass or plastic, which are bundled together in a flexible tube and



PREVIEW

Please [Sign In](#) or [Sign Up](#) to download the printable version of this worksheet

7 _____ our ear drum, and causes our ear drum and then three tiny bones in our ear to _____.



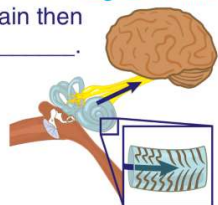
- A strike
- B be still
- C rub
- D vibrate

8 _____ of the **inner ear**, which is filled with liquid that begins to vibrate causing tiny hairs within it to vibrate as well.



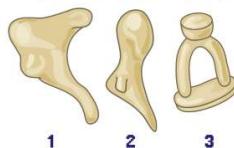
- A ear lobe
- B ear canal
- C ear wall
- D cochlea

9 The vibrations of the **hairs inside the cochlea** of the ear send a signal to the **brain**, which the brain then interprets as _____.



- A sound
- B light
- C heat
- D smell

10 This is a picture of the **three tiny bones** located in your middle ear: the **hammer, stirrup, and anvil**. They get their names because of how they look. **Which bone is labeled #2?**



- A hammer
- B stirrup
- C anvil
- D bucket