




Name _____ Class _____ Date _____

1 Ninety-seven percent of the water on earth is saltwater, and the **rest** is freshwater. **What percentage of the earth's water is freshwater?**

A 97%
B 13%
C 23%
D 3%



2 Earth experiences different hours of daylight throughout the year. **Which season has the longest hours of daylight?**

A winter
B spring
C summer
D fall



3 Planet Earth's average distance from the Sun is 149,600,000 km while Venus' average distance from the Sun is 108,200,000 km. **How many more kilometers is Earth from**

4 The earth takes **24 hours** to complete **one rotation**. How many times does the earth rotate completely in **one week**?



PREVIEW

Please [Sign In](#) or [Sign Up](#) to download the printable version of this worksheet

7 ... a storm is classified as a **hurricane**.

A 119 km/hr
B 91 km/hr
C 19 km/hr
D 100 km/hr



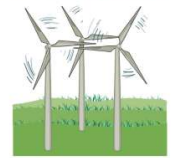
8 ... the hill than Ball A.

A 1.3 seconds
B 3.1 seconds
C 4.1 seconds
D 3.0 seconds

Ball	Time it took to roll down hill
Ball A	12.3 seconds
Ball B	9.2 seconds

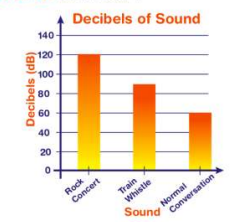
9 Let's say a wind turbine can generate **225 kilowatts** of electrical power. How many kilowatts could **three** of these wind turbines generate **all together**?

A 675 kilowatts
B 450 kilowatts
C 700 kilowatts
D 625 kilowatts



10 Which of those listed on the bar graph is the **loudest** sound to hear?

A rock concert
B jet plane
C train whistle
D normal conversation





Name _____ Class _____ Date _____

1 Ninety-seven percent of the water on earth is saltwater, and the **rest** is freshwater. **What percentage of the earth's water is freshwater?**

- A 97%
- B 13%
- C 23%
- D 3%



2 Earth experiences different hours of daylight throughout the year. **Which season has the longest hours of daylight?**

- A winter
- B spring
- C summer
- D fall



3 Planet Earth's average distance from the Sun is 149,600,000 km while Venus' average distance from the Sun is 108,200,000 km. **How many more kilometers is Earth from**

4 The earth takes **24 hours** to complete **one rotation**. How many times does the earth rotate completely in **one week**?



PREVIEW

Please [Sign In](#) or [Sign Up](#) to download the printable version of this worksheet

7 _____, a storm is classified as a **hurricane**.

- A 119 km/hr
- B 91 km/hr
- C 19 km/hr
- D 100 km/hr



the hill than ball A.

- A 1.3 seconds
- B 3.1 seconds
- C 4.1 seconds
- D 3.0 seconds

Ball	Time it took to roll down hill
Ball A	12.3 seconds
Ball B	9.2 seconds

9 Let's say a wind turbine can generate **225 kilowatts** of electrical power. How many kilowatts could **three** of these wind turbines generate **all together**?

- A 675 kilowatts
- B 450 kilowatts
- C 700 kilowatts
- D 625 kilowatts



10 Which of those listed on the bar graph is the **loudest** sound to hear?

- A rock concert
- B jet plane
- C train whistle
- D normal conversation

